

**KENDRIYA VIDYALAYA SANGATHAN  
BENGALURU REGION  
SAMPLE PAPER-MARCH 2022  
BLUE PRINT**

**CLASS :- VI  
SUBJECT:- SCIENCE**

**MAX MARKS:- 40  
TIMING:- 90 min**

<b>NAME OF THE CHAPTER</b>	<b>OBSERVATION AND REPORTING MCQ(10)</b>	<b>IDENTIFICATION AND CLASSIFICATION (10)</b>	<b>DISCOVERY OF FACTS (10)</b>	<b>APPLICATION AND SKILL BASED QUESTION INCLUDING DRAWING AND LABELING (10)</b>	<b>TOTAL (40)</b>
<b>Chapter 9: The Living Organisms and Their Surroundings</b>	1	VSA 1(1)	SA 2(1)	-	4
<b>Chapter 10: Motion and Measurement of Distances</b>	1		VSA 1(1)	SA 2(1)	4
<b>Chapter 11: Light, Shadows and Reflections</b>	1	VSA 1(1)	-	LA 4(1)	6
<b>Chapter 12: Electricity and Circuits</b>	1	VSA 1(1)	VSA 1(1)	SA 2(1)	5
<b>Chapter 13: Fun with Magnets</b>	1		LA 4(1)	SA 2(1)	7
<b>Chapter 14: Water</b>	1	LA 4(1)	VSA 1(1)	-	6
<b>Chapter 15: Air Around Us</b>	1(4) *Case Base Study	-		-	4
<b>Chapter 16: Garbage In, Garbage Out</b>	-	SA 2(1), VSA 1(1)	VSA 1(1)	-	4
<b>TOTAL</b>	10	10	10	10	40/40

**Remarks: Marks are outside the bracket and number of questions is inside the bracket.**

KENDRIYA VIDYALAYA SANGATHAN – BENGALURU REGION

SAMPLE QUESTION PAPER BLUE PRINT -TERM II : SESSION 2021-22

Class- VI

Subject- Mathematics

Marks: 40

Time- 2 Hours

SNO	Chapters	FNC	UBC	CA			PSA			TOTAL
		VSA	VSA	VSA	SA	LA	VSA	SA	LA	
1	DATA HANDLING	1(2)	1(2)				1(1)		3(1)	8
2	MENSURATION	1(2)	1(2)	1(1)		3(1)				8
3	ALGEBRA	1(2)	1(2)		2(1)		1(1)			7
4	RATIO AND PROPORTION	1(2)	1(2)	1(1)	2(1)					7
5	SYMMETRY	1(1)	1(1)	1(1)				2(1)		5
6	PRACTICAL GEOMETRY	1(1)	1(1)				1(1)	2(1)		5
Total		1(10)	1(10)	1(3)	2(2)	3(1)	1(3)	2(2)	3(1)	40(32)

### Design of Question Paper

Type of question	Marks per question	Total Number of question	Total Marks
VSA	1	26	26
Short Answer	2	4	8
Long Answer	3	2	6
Total		32	40

SNO	Chapter	Total
1	DATA HANDLING	8
2	MENSURATION	8
3	ALGEBRA	7
4	RATIO AND PROPORTION	7
5	SYMMETRY	5
6	PRACTICAL GEOMETRY	5
Total		40

**केन्द्रीयविद्यालय संगठनम् , बेङ्गलूरु-560093**  
**KENDRIYA VIDYALAYA SANGATHAN**  
**BENGALURU REGION**  
**SESSION ENDING EXAMINATION – MARCH 2022**

**प्रश्नपत्र-प्रारूपम् / BLUEPRINT**

**कक्षा Class: षष्ठी (VI) Sub: (संस्कृतम्) Sanskrit Max.Marks :40 Time : सार्धैकहोरा ( 1½hrs)**

प्रश्न-संख्या	मुख्यप्रश्नाः	प्रश्नप्रकाराः	अङ्क-वितरणम्	अङ्काः
1	अपठित-अनुच्छेदः-अ) एकपदेन	ज्ञानात्मकम् लघूत्तरात्मकम् च	1x2=2	05
	आ) पूर्णवाक्येन उत्तरत-	पूर्णवाक्यात्मकम् बोधनात्मकं च	1x1=1	
	इ) भाषिकं कार्यम्	विकल्पात्मकं ज्ञानात्मकं च	1x2=2	
2	चित्र-वर्णनम् ( वाक्ये रिक्तस्थान-पूरणम् )	विकल्पात्मकम् ( कोष्ठके सहायक-पदानि भवेयुः)	1x5=5	05
3	वाक्यांशानां मेलनम् / कोष्ठकस्य सहायेन वाक्यरचना	रचनात्मकम् ज्ञानात्मकम् च (उचित-कर्तृ-कर्म-क्रियापदानि कोष्ठके दातव्यानि )	1x4=4	04
4	उचितं पदम् / अव्ययं चित्वा वाक्यानि पूरयत-	विकल्पात्मकं ज्ञानात्मकं च (कोष्ठके सहायक-पदानि भवेयुः)	1x4=4	04
5	विलोमार्थक-पद-चयनम्	विकल्पात्मकं ज्ञानात्मकं च (कोष्ठके सहायक-पदानि भवेयुः)	1x3=3	03
6	गद्यांशः OR नाट्यांशः -प्रश्नाः- अ) एकपदेन	ज्ञानात्मकम् लघूत्तरात्मकम् च	1x2=2	04
	आ) पूर्णवाक्येन उत्तरत-	पूर्णवाक्यात्मकम् बोधनात्मकं च	2x1=2	
7	श्लोकः प्रश्नाः- अ) एकपदेन	ज्ञानात्मकम् लघूत्तरात्मकम् च	1x2=2	04
	आ) पूर्णवाक्येन उत्तरत-	पूर्णवाक्यात्मकम् बोधनात्मकं च	2x1=2	
8	घटनाक्रमः / भिन्नवर्गस्य पद-चयनम्	बहु-विकल्पात्मकम् ज्ञानात्मकम्	1x4=4	04
9	समानार्थक / तत्सम-तद्भव -पद-चयनम्	विकल्पात्मकम् ज्ञानात्मकम्	1x3=3	03
10	श्लोकांशानां मेलनम्	ज्ञानात्मकं रचनात्मकं च	1x4=4	04
	प्रश्नाः एवम् अङ्काः	<b>Total No of Questions &amp; Marks</b>	<b>38-प्रश्नाः</b>	<b>40</b>

**वि.सूचना – 1.** छात्राः प्रश्नपत्रिकायाम् एव उत्तराणि लिखेयुः , अतः लेखनार्थम् अपि स्थानं कल्पितव्यम्

( Question paper should be in booklet Worksheet type. )

2. छात्रेभ्यः तेषां नाम-कक्षाविभागः -क्रमसंख्या -दिनांकादीनां लेखनार्थम् प्रश्नपत्रस्य मुखपृष्ठे उपरि स्थानं कल्पितव्यम् ।

3. यथासाध्यं पाठस्य अभ्यासकार्याधारिताः प्रश्नाः स्वीकर्तव्याः ( प्रथम-प्रश्नं विहाय ) ।

4. प्रश्नपत्र-निर्माणार्थं द्वितीयसत्रस्य अष्टम-पाठात्-पञ्चदश-पाठपर्यन्तं ( Lesson 8-15) पाठाः स्वीकर्तव्याः ।

5. Baraha-Unicode – माध्यमेन प्रश्नपत्र-निर्माणं भवेत् (Font Size-14)

केंद्रीय विद्यालय संगठन, बेंगलुरु संभाग

द्वितीय सत्र परीक्षा-2022

कक्षा-6

विषय-हिंदी

अंक विभाजन(नील पत्र)

पूर्णांक-40

प्रश्न संख्या	विषय वस्तु	ज्ञानात्मक			अर्थ ग्रहण			रचनात्मक			प्रश्न संख्या	अंक
		अति लघु	लघु	दीर्घ	अति लघु	लघु	दीर्घ	अति लघु	लघु	दीर्घ		
1	अपठित गद्यांश पर आधारित प्रश्न	1(1)			4(4)						5	5
2	पठित पद्यांश पर आधारित प्रश्न	1(1)			4(4)						5	5
3	व्याकरण पर आधारित प्रश्न	10(10)									10	10
4	शब्द पर आधारित प्रश्न	5(5)									5	5
5	पाठों पर आधारित प्रश्न		2(1)			2(1)			2(1)		3	6
6	कविताओं पर आधारित प्रश्न					2(1)					1	2
7	बाल रामकथा पर आधारित प्रश्न		2(1)								1	2
8	संवाद लेखन									5(1)	1	5
	कुल	17(17)	4(2)	--	8(8)	4(2)	--	--	2(1)	5(1)	31	40

\*कोष्ठक में प्रश्न दिए गए हैं एवं बाहर अंक दिए गए हैं।

पाठ्य पुस्तक-वसंत भाग-1 : झाँसी की रानी से लेकर साँस साँस में बाँस तक

बाल रामकथा- सोने का हिरण से लेकर राम का राज्याभिषेक तक

नोट:- व्याकरण- (कारक,संज्ञा,भिन्नार्थक शब्द,विशेषण,योजक शब्द,प्रत्यय,लिंग,वाक्य-प्रयोग ,शब्द जोड़कर नया शब्द बनाना)

शब्द आधारित- विलोम

पर्यायवाची

वाक्यांश के लिए एक शब्द

रिक्त स्थान की पूर्ति

सही शब्द को चुनना

**KENDRIYA VIDYALAYA SANGATHAN**

**BENGALURU REGION**

**SAMPLE QUESTION PAPER – TERM II; SESSION 2021-22**

Class: VI

Max. Marks: 40

Subject: Social Science

Time: 1.5 hrs.

SL. NO	TOPICS	OBJECTIVE QN (MCQ) (1M)	VSA (1M)	SA (2M)	LA (4M)	MAP	TOTAL
1.	Ashoka the Emperor who give up war	1(1)	1(1)	2(1)		*2(1)	6(4)
2	Major Domains of the Earth	1(1)	1(1)	2(1)			4(3)
3	Vital villages thriving towns	1(1)	1(1)				2(2)
4	Rural Administration	1(1)	1(1)				2(2)
5	Traders,kings & Pilgrims	1(1)	1(1)				2(2)
6	Major Landforms of the Earth	1(1)	1(1)	2(1)			4(3)
7	Urban Administration	1(1)	1(1)				2(2)
8	New Empires & kingdoms	1(1)	1(1)		4(1)		6(3)
9	Our country India			2(1)		*2(1)	4(2)
10	Rural livelihoods	1(1)	1(1)				2(2)
11	Buildings, painting & books	1(1)		2(1)			3(2)
12	India-climate, vegetation & Wildlife			2(1)			2(1)
13	Urban Livelihood		1(1)				1(1)
	<b>TOTAL</b>	<b>10</b>	<b>10</b>	<b>12</b>	<b>4</b>	<b>4</b>	<b>40</b>

**NOTE-**

1)The number in the bracket indicates Number of Questions and the Number outside the bracket indicates the marks.

2)CCT QUESTIONS (2)in VSQ (1 MARK Question)

3)ANY ONE CHOICE QUESTION IN SA questions.(2 MARKS questions)

4)CHOICE QUESTION FOR LA Question.(4 Marks Question)

5)\* Indicates map question of GEOGRAPHY & HISTORY.



**BENGALURU REGION**

**KENDRIYA VIDYALAYA SANGATHAN**  
**BENGALURU REGION**  
**SAMPLE QUESTION PAPER - TERM II**  
**SESSION 2021-22**

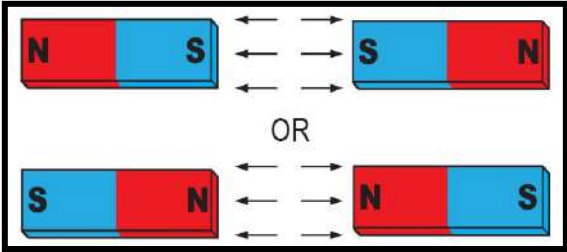
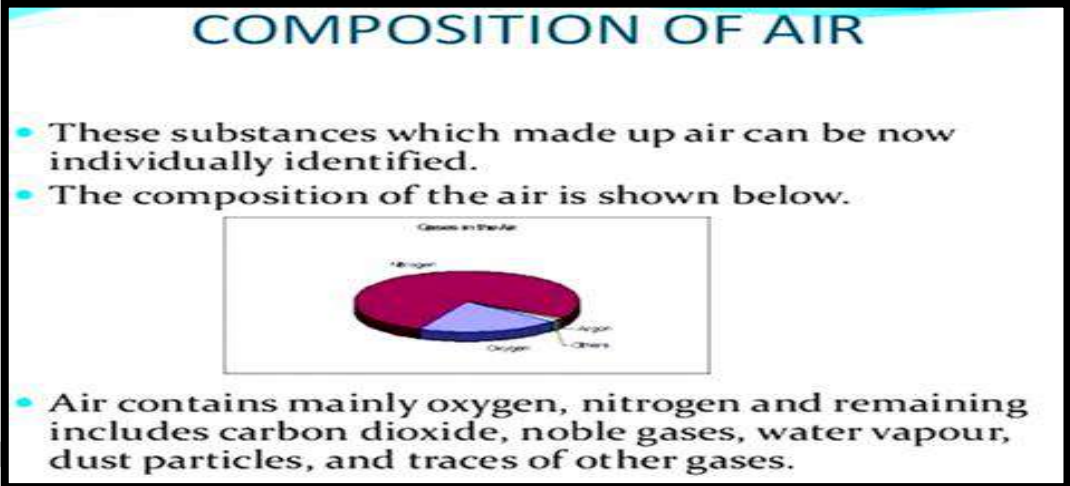
Class VI  
Subject : ENGLISH

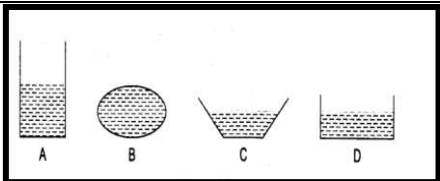
Max. Marks : 40  
Time : 2hrs.

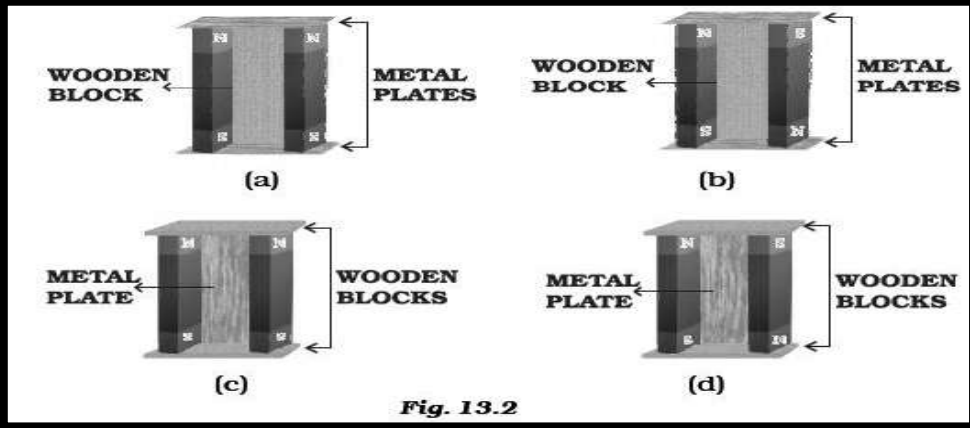
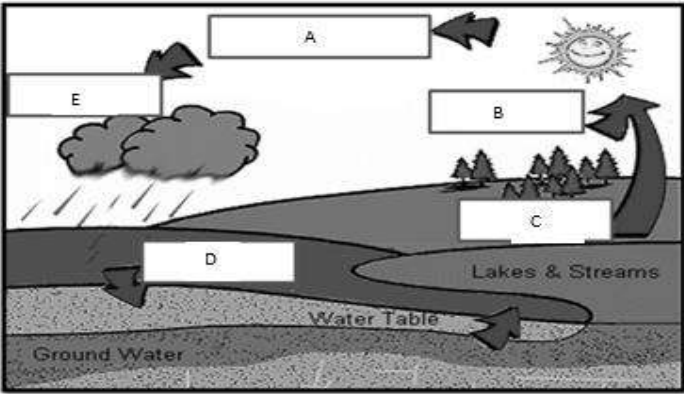
SL NO	READING (10)				WRITING GRAMMAR & SPELLING (20)				LITERATURE (10)				TOTAL (40)	
		MCQ	VSA	SA	LA	MCQ	VSA	SA	LA	MCQ	VSA	SA		LA
1	Reading	(1X10)10												10
2	Writing Grammar & Spelling					(1X10)10	(1X5)5		(1X5)5					20
3	Literature										(1X3)3	(1X5)5	(1X2)2	10
<b>TOTAL</b>		<b>10</b>				<b>10</b>	<b>5</b>	<b>-</b>	<b>5</b>	<b>-</b>	<b>3</b>	<b>5</b>	<b>2</b>	<b>40</b>





	In the above figure, the proper way of reading scale is (a) C (b) B (c) A (d) Any way can be correct	
Q 5.	 <p>In the given above figure the like poles</p> <p>a)attract each other b)repel each other c)no change d)all the above</p>	1
Q 6.	A battery is (a) a single cell (b) a combination of cells in which cells are joined (+) to (-) (c) a combination of cells in which cells are joined (+) to (+) (d) None of these	1
Q No. 7 to 10 are case base study from the image given below. Read it carefully to answer them.		
		
Q 7.	Which of the following gas we use in breathing? (a) Carbon dioxide (b) Nitrogen (c) Oxygen (d) None of these	1
Q 8.	Wind does not help in the movement of (a) Firki (b) Weather cock (c) Ceiling fan (d) Sailing yacht	1
Q 9.	Which of the following gas helps in burning? (a) Nitrogen (b) Oxygen (c) Carbon dioxide (d) Carbon monoxide	1
Q 10.	The two gases which together make up about 99 per cent of the air are (a) nitrogen and carbon dioxide (b) nitrogen and ozone	1

	(c) nitrogen and oxygen (d) carbon dioxide and oxygen	
<b>SECTION - B</b>		
Q 11.	Write the mirror image of 'SMART'?	1
Q 12.	Name the habitat of the following plants: i) Cactus ii) Hydrilla	1
Q 13.	Identify the materials that can be added to a compost pit from the following list:- dried leaves, plastic cap, plastic bottle, pieces of news paper	1
Q 14.	Define vermicomposting.	1
Q 15.	What is the direction of the current in the electric circuit?	1
Q 16.	What does your Sports teacher use to measure the length of the playground?	1
Q 17.	What is the purpose of using an electric switch? Name two electrical gadgets that have switches built into them.	1
Q 18.	<div style="text-align: center;">  </div> <p>There are 4 containers A, B, C and D with same amount of water in each. Answer the following based on them.</p> <p>(a) Name the container in which water will evaporate faster than all others.</p> <p>(b) Name the container in which water will evaporate very slowly.</p>	1
<b>SECTION - C</b>		
Q 19.	A 30 cm scale has one end broken. The mark at the broken end is 2.6 cm. How would you use it to measure the length of your pencil? Explain the method.	2
Q 20.	How do the desert animals prevent the loss of water from their body?(any two point)	2
Q 21.	Why should we not throw garbage in plastic bags?(any two point)	2
Q 22.	Why should an electrician use rubber gloves while repairing an electric switch at your home? Explain.	2
Q 23.	(i) Few iron nails and screws got mixed with the wooden shavings while a carpenter was working with them. How can you help him in getting the nails and screws back from the scrap without wasting his time in searching with his hands? (ii) Draw a neat and labelled diagram of a bar magnet.	2
<b>SECTION - D</b>		

<p>Q 24.</p>	 <p style="text-align: center;"><b>Fig. 13.2</b></p> <p>(i) Observe the above figure and identify the correct method to keep the magnet safely. Give reason to support your answer. (any two point)</p> <p>(ii) Write two properties of Magnet.</p>	<p>4</p>
<p>Q 25.</p>	<p>(i) With the help of neat and labelled diagram explain the activity to show that light travels in a straight line.</p> <p>(ii) Write the conditions for obtaining a shadow.</p>	<p>4</p>
<p>Q 26.</p>	 <p>Observe the above figure of water cycle write the name of any four processes involved in it and explain the process of water cycle.</p>	<p>4</p>

**KENDRIYA VIDYALAYA SANGATHAN  
BENGALURU REGION  
SAMPLE PAPER-MARCH 2022 SET-2**

**CLASS: - VI  
SUBJECT: - SCIENCE**

**MAX MARKS: - 40  
TIMING: - 90 min**

**General Instructions: -**

**This question paper comprises four sections A, B, C, D. There are 32 questions in the question paper. All questions are compulsory.**

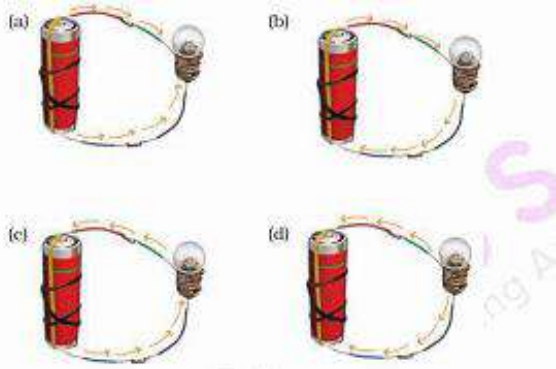
**Section- A- Question no 1 to 10 are multiple choice questions, carrying 1 mark each.**

**Section- B - Question no 11 to 18 are very short answer type questions, carrying 1 mark each. Answers to these questions should be in the range of one word or one sentence.**

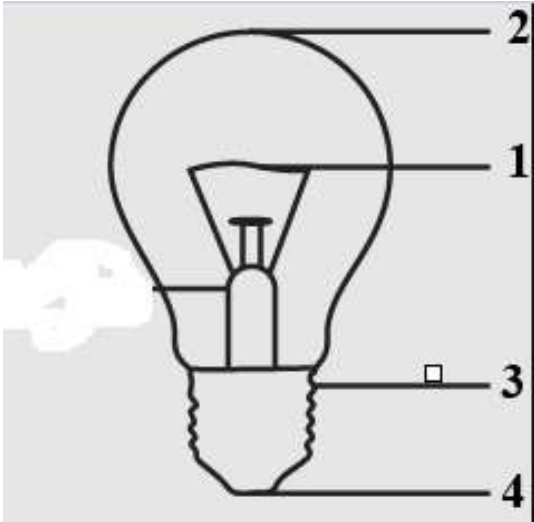

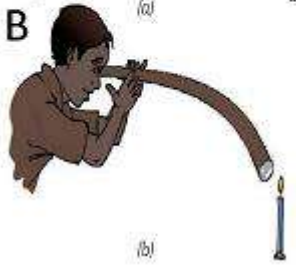
**Section- C - Question no 19 to 23 are short answer type questions, carrying 2 marks each. Answers to these questions should be in the range of 30 to 50 words**

**Section- D- Question no 24 to 26 are long answer type questions, carrying 4marks each.**



S.NO	QUESTION	MKS
<b>SECTION A(1x10)</b>		
<b>1</b>	Fishes have adapted to live in water. Which of the following features is an adaptation? a) Colour b) Shape c) Size d) Weight	<b>1</b>
<b>2</b>	Pick out the correct one- a) 1 m =100 cm b) 1cm = 100mm c) 1km=100m d) 1mm=100mic.m	<b>1</b>
<b>3</b>	A non- luminous object is an object which- a) Produces its own light	<b>1</b>

	<p>b) Does not produce its own light  c) Produces light only at night  d) Can be seen only in the day</p>	
4	 <p>Which of the above images shows the correct direction of electric current?</p>	1
5	<p>Which of the following is a magnetic substance?</p> <p>a) Aluminium  b) Gold  c) Copper  d) Cobalt</p>	1
6	<p>What fraction of our earth is covered with water?</p> <p>a) 1/2  b) 2/3  c) 3/4  d) 2/4</p>	1
	<p>Question no 7 to 10 are CCT based questions on the content given below.  Read it carefully and answer them.</p> <p style="text-align: center;"><b>AIR SPEED &amp; AIR PRESSURE</b></p> <p>Cyclone is a rotation of air at high speeds in the atmosphere at a height of around 10 to 15 km. The centre of the cyclone (also called the eye of the storm) is a clean area where there are no clouds but only light winds.</p> <p>The cloud region has high-speed winds blowing at 150 to 250 km per hour accompanied by heavy rainfall. The first indication of a cyclone can be observed when strong winds start flowing and pushing away the water from the shores. The formation of a cyclone that depends upon different factors like, the temperature of the place, the wind speed, the direction of the winds and the humidity of the place.</p> <p>When these high waves hit the shore, it results in the destruction of life and property to a great extent, the soil of the area also loses its fertility after a</p>	1X4

	cyclone, Floods can appear if rainfall continues for a longer duration and High-speed winds in the cyclone affect the telephonic communication lines, uproot trees, damage houses and cause loss of life.					
<b>7</b>	State whether the following are the effects of a cyclone: Yes/No <table border="1" style="width: 100%; border-collapse: collapse;"> <tr> <td style="width: 80%;">Cyclone can result in extremely high waves in the sea or ocean because of the low pressure.</td> <td style="width: 20%;">Yes/No</td> </tr> <tr> <td>The soil of the area loses its fertility after a cyclone due to erosion of soil</td> <td>Yes/No</td> </tr> </table>	Cyclone can result in extremely high waves in the sea or ocean because of the low pressure.	Yes/No	The soil of the area loses its fertility after a cyclone due to erosion of soil	Yes/No	
Cyclone can result in extremely high waves in the sea or ocean because of the low pressure.	Yes/No					
The soil of the area loses its fertility after a cyclone due to erosion of soil	Yes/No					
<b>8</b>	<p>Cyclone causes:</p> <ul style="list-style-type: none"> <li>i) Loss of life and property</li> <li>ii) Increases the fertility of the soil</li> <li>iii) Floods that have a catastrophic effect.</li> <li>iv) All of the above.</li> </ul> <p>Tick the correct option:</p> <ul style="list-style-type: none"> <li>a) i, ii</li> <li>b) i, iii</li> <li>c) ii, iii</li> <li>d) iv only</li> </ul>					
<b>9</b>	<p>Following are precautions one must take in case a storm is accompanied by lightning.</p> <ul style="list-style-type: none"> <li>(i) Do not take shelter under a tree.</li> <li>(ii) Do not take shelter under an umbrella with a metallic end.</li> <li>(iii) Do not take shelter in open garages, storage sheds, etc.</li> <li>(iv) Do not take shelter in a bus in the open.</li> </ul> <p>Which one of these is not correct?</p> <p>(a) (i) (b) (ii) (c) (iii) (d) (iv)</p>					
<b>10</b>	The centre of a cyclone is a calm area called _____					
<b>SECTION B (1x 10)</b>						
<b>11</b>	When a seed turns into a sprout, we say it has .....	<b>1</b>				
<b>12</b>	Name the instrument used by your PT teacher to measure the playground .	<b>1</b>				
<b>13</b>	Define luminous object.	<b>1</b>				
<b>14</b>	Materials that do not allow current to pass through them are called?	<b>1</b>				

15	A device that is used to break an electric circuit is called _____	1
16	Wet clothes dry due to the process of evaporation. TRUE/FALSE	1
17	What is vermicomposting?	1
18	If the following substances are buried in a pit for 4 to 5 days pick out the substances that will rot completely- Dry leaves, pieces of glass, aluminium foil, old newspapers	1
SECTION C(2x9)		
19	Responding to stimulus is a characteristic of living beings. Explain with an example	2
20	Name the unit of measurement you would use to measure a) The weight of a gold earring b) The distance from Bangalore to Hyderabad	2
21	Label the given figure correctly 	2
22	Where do iron filings stick on a bar magnet? Draw a diagram and label its parts to show this.	2
23	What do we mean by recycle? Name two things that can be recycled.	2
SECTION D (4x3)		
24	A  B 	4



	<p>Study the given image and answer the following: -</p> <ol style="list-style-type: none"> <li>What does the boy have in his hand?</li> <li>In image (A) what does the boy observe?</li> <li>In image (B) does he observe the same thing?</li> <li>What can you conclude from this activity?</li> </ol>	
25	<p>What are artificial magnets? Describe a method of making a magnet in your lab.</p>	4
26	<div style="display: flex; justify-content: space-around; align-items: center;">   </div> <p>This is a bottle taken out from the refrigerator</p> <ol style="list-style-type: none"> <li>What is seen on the outside of the bottle?</li> <li>How does that happen?</li> <li>Name the process.</li> <li>Can water change into any other state?</li> </ol>	4

**KENDRIYA VIDYALAYA SANGATHAN  
BENGALURU REGION  
SAMPLE PAPER-MARCH 2022**

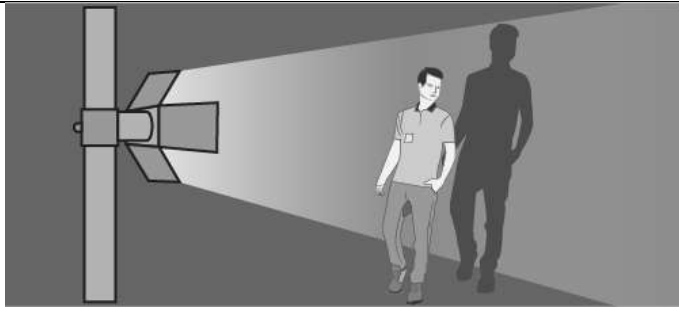
**CLASS :- VI  
SUBJECT:- SCIENCE**

**MAX MARKS:- 40  
TIMING:- 90 min**

**General Instructions:-**

- 1. This question paper comprises four sections A, B, C, D. There are 32 questions in the question paper. All questions are compulsory.**
- 2. Section- A- Question no 1 to 10 are multiple choice questions, carrying 1 mark each.**
- 3. Section- B - Question no 11 to 18 are very short answer type questions, carrying 1 mark each. Answers to these questions should be in the range of one word or one sentence.**
- 4. Section- C - Question no 19 to 23 are short answer type questions, carrying 2 marks each. Answers to these questions should be in the range of 30 to 50 words**
- 5. Section- D- Question no 24 to 26 are long answer type questions, carrying 4marks each.**

<b>SECTION A</b>		
<b>Q.NO</b>		<b>MARKS</b>
1	The place where living beings live is called their _____ a) Adaptation b) Habitat c) Habit d) Movement	1
2	The distance between Bengaluru and Mysuru is expressed in units of a) Decametre b) metre c) centimetre d) kilometre	1
3	A student stands in front of a lamp to produce the shadow of his body. The shadow of the boy is formed on the screen as shown.	1



What can be concluded from the observation regarding formation of the shadows?

- a) the screen must be placed in front of the opaque object
- b) the opaque object must be placed behind the source of light
- c) the opaque object must be placed between source of light and the screen
- d) the source of light must be placed between the opaque object and the screen.

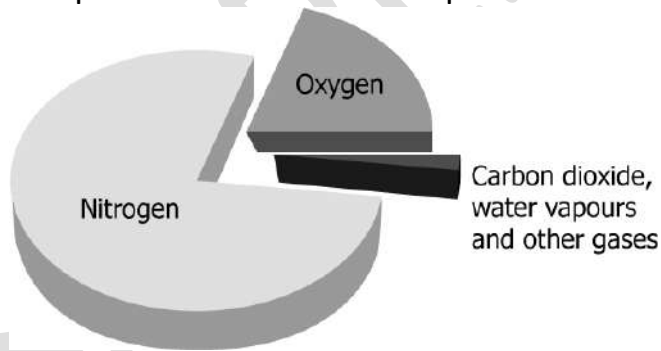
4	<p>A student studies that electric wires generally have a plastic or rubber coating around them. Which of these describes the role of the coating in a wire?</p> <ul style="list-style-type: none"> <li>a) It ensures safe transfer of electricity</li> <li>b) It reduces the wastage of electricity in the wires</li> <li>c) It enables transfer of electricity to long distances</li> <li>d) It helps electricity to move faster through the wires</li> </ul>	1
5	<p>Which of these substances are likely to be attracted to a magnet?</p> <ul style="list-style-type: none"> <li>a) Nail and Pencil</li> <li>b) Eraser and Pencil</li> <li>c) Nail and Safety pin</li> <li>d) Plastic Ruler and Pencil</li> </ul>	1
6	<p>The landscape of region X was mostly covered with concrete, which was later modified to have more trees and plants. What would be the effect of modification of the landscape on the groundwater level of region X?</p> <ul style="list-style-type: none"> <li>a) The groundwater level would increase.</li> <li>b) The groundwater level would decrease.</li> <li>c) The groundwater level would remain the same.</li> <li>d) The groundwater level would first increase and then decrease.</li> </ul>	1
	<p>Read the following passage carefully and answer the questions from 7 to 10.</p>	



All living things require air. Air is a mixture of many gases like nitrogen, oxygen, carbon dioxide and water vapour. It also contains dust particles, smoke etc. The major part of air is nitrogen. It does not support in burning of substances. Dust and smoke are produced during burning of fuel. It contains few gases and fine dust particles which are harmful for health and creates many respiratory diseases like Asthma, Chronic Obstructive Pulmonary Disease (COPD) , Acute Bronchitis etc. Oxygen is the essential part of air and for the survival of animals. Plants use carbon dioxide for the process of photosynthesis and produce oxygen. Carbon dioxide makes up small component of air around us. Any substance which burns actually consumes oxygen and produce carbon dioxide and other gases.

7

The pie chart shows the composition of air.



Which is the most abundant component of air?

- a)Oxygen
- b) Nitrogen
- c)Water vapour
- d)Carbon dioxide

1

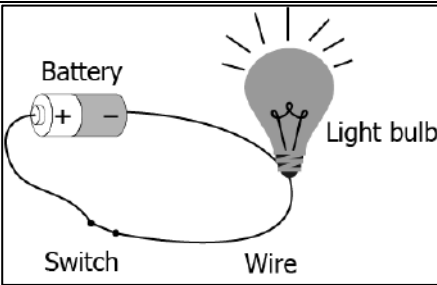
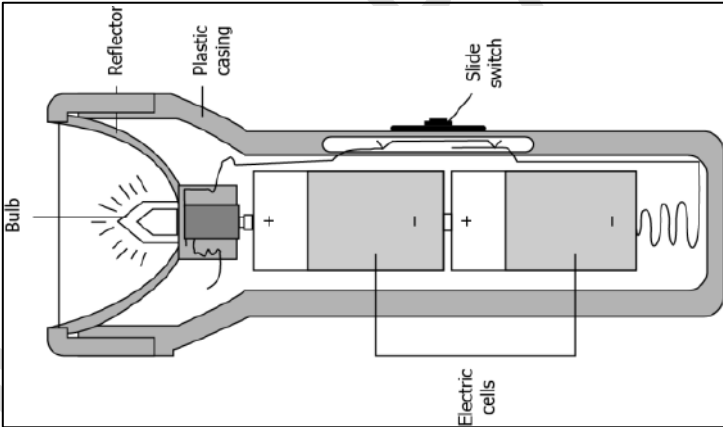
8

Plant cells synthesise their own food in the presence of sunlight. Which gas is used by the plants to synthesise their own food?

- a)Oxygen
- b)Nitrogen
- c)Hydrogen
- d)Carbon dioxide

1

9	<p>The graph shows the composition of air.</p> <div data-bbox="568 176 1082 591" data-label="Figure"> <p><b>Gases in the Atmosphere</b></p> <table border="1"> <thead> <tr> <th>Gas</th> <th>Approximate Percentage</th> </tr> </thead> <tbody> <tr> <td>Nitrogen</td> <td>78%</td> </tr> <tr> <td>Oxygen</td> <td>21%</td> </tr> <tr> <td>All other gases</td> <td>0.9%</td> </tr> <tr> <td>Argon</td> <td>0.9%</td> </tr> <tr> <td>Carbon dioxide</td> <td>0.3%</td> </tr> </tbody> </table> </div> <p>How much approximately do nitrogen and oxygen together make up air?</p> <p>a) 20% of the air  b) 50% of the air  c) 65% of the air  d) 99% of the air</p>	Gas	Approximate Percentage	Nitrogen	78%	Oxygen	21%	All other gases	0.9%	Argon	0.9%	Carbon dioxide	0.3%	1
Gas	Approximate Percentage													
Nitrogen	78%													
Oxygen	21%													
All other gases	0.9%													
Argon	0.9%													
Carbon dioxide	0.3%													
10	<p>Which of these gases is associated with human activities that involve the burning of fuels and becomes a major source of air pollution?</p> <p>a) Oxygen  b) Carbon dioxide  c) Water vapour  d) Nitrogen</p>	1												
<b>SECTION B</b>														
11	<p>Which of the non-living things below are once a part of living things:  Electric bulb, cooking oil, salt, rubber, soil</p>	1												
12	<p>A student measures the length of the pencil using a broken ruler. The image shows the measurement by the broken ruler.</p> <div data-bbox="560 1460 1096 1630" data-label="Image"> </div> <p>The student made an error and records the length of the pencil as 7 cm. How can this error be removed?</p>	1												
13	<p>Correct the following statements:</p> <p>a) The colour of the shadow of an object depends on its colour.  b) Transparent objects allow light to pass through them partially.</p>	1												
14	<p>A student observes the circuit shown in the image and concludes that it is a complete circuit.</p>	1												

	 <p>Give a reason to support his conclusion.</p>	
15	When a bulb is fused, it does not light up. Explain why?	1
16	Why do wet clothes placed on a clothes line get dry after some time?	1
17	What is the best way to manage waste?	1
18	It is better to use compost instead of chemical fertilisers. Why? Give one reason.	1
<b>SECTION C</b>		
19	What are the specific features of the deer that helps it to detect the presence of the predator like lion?	2
20	How will you measure the length of a curved line? Explain with the help of an activity.	2
21	 <p>What are the functions of a) Reflector b) slide Switch c) electric cell and d) Plastic casing in a torch?</p>	2
22	What are the two properties of magnets?	2
23	Waste of which of the following two materials is more polluting: polythene or paper? Give reasons for your answer.	2
<b>SECTION D</b>		
24	a) What are transparent, translucent and opaque objects? Explain with an example. b) What is a reflection?	4
25	a) Distinguish between magnetic and non-magnetic materials. Give two examples for each of them. b) Write two methods by which a magnet can be demagnetised.	4
26	a) Why is there need for conserving water? Give two reasons. b) State for each of the following whether it is due to evaporation	4

	or condensation: i) Water drops appear on outer surface of a glass containing cold water. ii) Steam rising from wet clothes while they are ironed. iii) Fog appearing on a cold winter morning iv) Blackboard dries up after wiping it.	
	*****	

SAMPLE PAPER

KENDRIYA VIDYALAYA SANGATHAN / केन्द्रीय विद्यालय संगठनBENGALURU REGION / बेंगलुरु क्षेत्रSAMPLE QUESTION PAPER / प्रतिदर्श प्रश्न पत्र

TERM II / टर्म II

SESSION 2021-22 / सत्र 2021-22

Class: VI / कक्षा: VI

Max. Marks: 40 / अधिकतम अंक: 40

Sub: Social science / सामाजिक विज्ञान

Time: 1.5 hrs. / समय: 1.5 घंटे

**सामान्य निर्देश:**

- (i) प्रश्न पत्र में कुल 28 प्रश्न हैं। सभी प्रश्न अनिवार्य हैं।  
(ii) प्रत्येक प्रश्न के सामने अंक दिए गए हैं।  
(iii) क्रमांक 1 से 10 तक के प्रश्न वस्तुनिष्ठ प्रकार के प्रश्न हैं। प्रत्येक प्रश्न एक अंक का है।  
(iv) क्रमांक 11 से 20 तक के प्रश्न अति लघु प्रकार के प्रश्न हैं। प्रत्येक प्रश्न एक अंक का है।  
(v) क्रमांक 21 से 26 तक के प्रश्न लघु प्रश्न हैं। प्रत्येक प्रश्न 2 अंक का है।  
(vi) प्रश्न संख्या 27 एक दीर्घ उत्तरीय प्रश्न है जिसमें 4 अंक हैं।  
(vii) प्रश्न संख्या 28, 4 अंक का मानचित्र प्रश्न है।  
(viii) लघु उत्तरीय और दीर्घ उत्तरीय प्रश्नों में से प्रत्येक में एक आंतरिक विकल्प प्रश्न दिया गया है। आपको ऐसे सभी प्रश्नों में से केवल एक विकल्प का प्रयास करना है।

**General Instructions:**

- (i) The question paper has **28** questions in all. **All** questions are **compulsory**.  
(ii) Marks are indicated against each question.  
(iii) Questions from serial number **1** to **10** are Objective type questions. Each question carries **one** mark.  
(iv) Questions from serial number **11** to **20** are Very Short Answer type questions. Each question carries **one** mark.  
(v) Questions from serial number **21** to **26** are Short Answer type Questions. Each question carries **2** marks.  
(vi) Question number **27** is a Long Answer type Question carrying **4** marks.  
(vii) Question number **28** is a Map Question of **4** marks  
(viii) One Internal choice question each has been provided in Short Answer and Long Answer Type Question. You have to attempt only **one** of the alternatives in all such questions.



Q1	<p>Ancient name of Coastal Orissa</p> <p>(a) Kalinga (b) Rampurva (c) Indraprastha (d) Sarnath</p> <p>तटीय उड़ीसा का प्राचीन नाम</p> <p>(क) कलिंग (ख) रामपुरवा (ग) इंद्रप्रस्थ (घ) सारनाथ</p>	1
Q2	<p>Which is the Earth's solid portion?</p> <p>(a) The Atmosphere (b) Hydrosphere (c) The Lithosphere (d) All of these</p> <p>कौन सा भाग पृथ्वी ठोस का भाग है?</p> <p>(क) वातावरण (ख) हाइड्रोस्फीयर (ग) लिथोस्फीयर (घ) ये सभी</p>	1
Q3	<p>How does 'Northern Black Polished Ware' type of pottery get its name?</p> <p>(a) It was made only by Black Desert (b) It was made only by North America (c) It was exclusively made in the southern part of the subcontinent (d) It is generally found in the northern part of the subcontinent</p> <p>कैसे ' उत्तरी काले पॉलिश बर्तन ' मिट्टी के बर्तनों के प्रकार इसका नाम मिल है?</p> <p>(क) यह केवल काले रेगिस्तान द्वारा बनाया गया था (ख) यह केवल उत्तरी अमेरिका द्वारा बनाया गया था (ग) यह विशेष रूप से उपमहाद्वीप के दक्षिण भाग में बनाया गया था (घ) यह आम तौर पर उपमहाद्वीप के उत्तरी भाग में पाया जाता है</p>	1
Q4	<p>All the states of India are divided into?</p>	1


	<p>(a) cities (b) Nagars (c) grams (d) districts</p> <p>भारत के सभी राज्यों में विभाजित हैं?</p> <p>(क) शहर (ख) नगर (ग) ग्राम (घ) जिले</p>	
Q5	<p>The best-known of the rulers who controlled the Silk Route were the</p> <p>(a) Mughals (b) Satvahanas (c) Mauryas (d) Kushanas</p> <p>सिल्क रूट को नियंत्रित करने वाले शासकों में से सबसे प्रसिद्ध थे</p> <p>(क) मुगल (ख) सतवाहन (ग) मौर्य (घ) कुषाण</p>	1
Q6	<p>How plateau is differ from the mountains</p> <p>(a) It is considerably higher than the surroundings (b) Plateau is elevated flat land (c) There are three types of mountains (d) Its elevation is more than 600 metres</p> <p>कैसे पठार पहाड़ों से अलग है?</p> <p>(क) यह परिवेश की तुलना में काफी अधिक है (ख) पठार ऊंचा फ्लैट भूमि है (ग) तीन प्रकार के पर्वत होते हैं (घ) इसकी ऊंचाई 600 मीटर से अधिक है</p>	1
Q7	<p>Under municipality a city is divided into</p> <p>(a) Wards (b) Section (c) Councils</p>	1

	<p>(d) Parts</p> <p>नगर पालिका के तहत एक शहर में विभाजित है</p> <p>(□) वार्ड (ख) धारा (ग) परिषदें (घ) पार्ट्स</p>	
Q8	<p>Xuanzang visited India in the reign of _____</p> <p>(a) Ramagupta (b) Samudragupta (c) Harshavardhana (d) Chandragupta II</p> <p>जुआनजांग _____ के शासनकाल में भारत का दौरा किया</p> <p>(क) रामगुप्त (ख) समुद्रगुप्ता (ग) हर्षवरधना (घ) चंद्रगुप्त द्वितीय</p>	1
Q9	<p>The river which is called the Ganga of the south</p> <p>(a) Krishna (b) Tapi (c) Narmada (d) Godavari</p> <p>दक्षिण की गंगा कहलाने वाली नदी</p> <p>(क) कृष्ण (ख) तापी (ग) नर्मदा (घ) गोदावरी</p>	1
Q10	<p>A man engaged in making iron goods tools, instruments etc</p> <p>(a) Labour (b) Potter (c) Teacher (d) Blacksmith</p> <p>लोहे के सामान के औजार, औजार आदि बनाने में लग व्यक्ति है :-</p> <p>(क) श्रम (ख) कुम्हार (ग) शिक्षक (घ) लोहार</p>	1
Q11	<p>Explain the meaning of word 'Dynasty'.</p> <p>'राजवंश' शब्द का अर्थ समझाएं।</p>	1
Q12	<p>Why atmosphere important to us?</p>	1

	वायुमण्डल हमारे लिए महत्वपूर्ण क्यों है:- ?	
Q13	<p>What are Jatakas?</p> <p>OR</p> <p>How do we find out about early cities of subcontinent?</p> <p>जातक क्या हैं?</p> <p>या</p> <p>हम उपमहाद्वीप के शुरुआती शहरों के बारे में कैसे पता लगाएंगे?</p>	1
Q14	<p>What is the responsibility of a Police Station?</p> <p>पुलिस स्टेशन की जिम्मेदारी क्या है?</p>	1
Q15	<p>READ the passage and answer the questions-</p> <p>“The rich, glossy colours, as well as its smooth texture, make it a highly valued fabric in most societies. Making of this cloth is a complicated process. Raw product has to be extracted from the worms spun into thread and then woven into cloth. Techniques of making this cloth was first invented in one ASIAN around 7000 years ago. While the techniques remained a closely guarded secret for thousands of years , some people from this country who went to distant lands on foot, horseback, and on , camels, carried this cloth with them.”</p> <p>ANSWER THESE QUESTIONS:-</p> <p>(A) Name the Cloth about which this paragraph is written.</p> <p>B) The people from this country who went to distant lands on foot, horseback, and on , camels, carried this cloth with them. They followed the path came to be known as _____.</p> <p>इसे पढ़ें , सवालों के जवाब आप देद-</p> <p>"अमीर, चमकदार रंग, साथ ही साथ इसकी चिकनी बनावट, यह ज्यादातर समाजों में एक अत्यधिक मूल्यवान कपड़े बनाते हैं। इस कपड़े को बनाना एक जटिल प्रक्रिया है। कच्चे उत्पाद को धागे में घूमती कीड़े से निकाला जाना चाहिए और फिर कपड़े में बुना जाना चाहिए। इस कपड़े को बनाने की तकनीक सबसे पहले करीब 7000 साल पहले एक एशियाई में ईजाद की गई थी। हालांकि यह</p>	1

	<p>तकनीक हजारों वर्षों तक बारीकी से संरक्षित रहस्य बनी रही, लेकिन इस देश के कुछ लोग जो पैदल, घोड़े की पीठ पर दूर देशों में गए और ऊंटों ने इस कपड़े को अपने साथ ले गए।</p> <p>इन सवालों के जवाब आप दे: -</p> <p>A) उस कपड़े का नाम बताएं जिसके बारे में यह लिखा गया है।</p> <p>ख) इस देश के लोग जो पैदल, घोड़े की पीठ और ऊंटों पर दूर देशों में जाते थे, वे इस कपड़े को अपने साथ ले जाते थे, इस मार्ग को कहते हैं।</p>	
Q16	<p>Describe any one major feature of Plains .</p> <p>मैदानों की किसी भी एक प्रमुख विशेषता का वर्णन करें।</p>	1
Q17	<p>Elections are held once every _____ years for the panchayat as well as for the municipality.</p> <p>पंचायत और नगर पालिका के चुनाव _____ वर्ष में एक बार होते हैं</p>	1
Q18	<p>_____ was the capital of Chalukyas.</p> <p>_____ चालुक्यों की राजधानी थी।</p>	1
Q19	<p>Imagine you are a member of a fishing family and you are discussing whether to take a loan from the bank for an engine. What would you say?</p> <p>कल्पना कीजिए कि आप एक मछली पकड़ने के परिवार के एक सदस्य हैं और आप चर्चा कर रहे हैं कि एक इंजन के लिए बैंक से ऋण लेना है या नहीं। आप क्या कहेंगे?</p>	1
Q20	<p>Write about any one benefits does Sudha get along with her salary?</p> <p>किसी भी एक लाभ के बारे में लिखें सुधा को उसकी सैलरी के साथ मिलता है?</p>	1
Q21	<p>Who was Megasthenese? Write one reason for which he is known even today.</p> <p>मेगाथेनीज़ कौन था? एक कारण लिखें जिसके लिए वह आज भी जाने जाते हैं।</p>	2

Q22	In which Continent of the world you live? Give a brief description of any one Continent. आप दुनिया के किस महाद्वीप में रहते हैं? किसी भी एक महाद्वीप का संक्षिप्त विवरण दें।	2
Q23	What are mountain ranges? Give 2 examples of mountain ranges. पर्वत श्रृंखलाएं क्या हैं? 2 पर्वत श्रृंखलाओं के उदाहरण दें।	2
Q24	What do you mean by Alluvial deposits? Where in India you will get Alluvial Soil? जलोढ़ जमाव से आपका क्या तात्पर्य है? भारत में आपको जलोढ़ मिट्टी कहां से मिलेगी?	2
Q25	Mention some features of the Ajanta Painting? आप अजंता पेंटिंग की कुछ विशेषताएं बताएं।	2
Q26	What steps has been taken by Government of India in order to protect wildlife? OR What are Migrated Birds? Give an account of some important migratory birds. वन्यजीवों की सुरक्षा के लिए भारत सरकार ने क्या कदम उठाए हैं? या प्रवासी पक्षी क्या हैं? कुछ महत्वपूर्ण प्रवासी पक्षियों का लेखा-जोखा दें।	2
Q27	Describe some of the main achievements of the Pallavas . OR What is the Harshacharita and it has description of which ruler ? पल्लवों की कुछ मुख्य उपलब्धियों का वर्णन करें । या	4

	हर्षाचारिता क्या है ,और इसमें किस शासक का वर्णन है?	
Q28	<p>On an outline map of India, mark the following:</p> <p>a)Andaman Islands (b) Eastern Ghats (c) Ujjain (d)Pataliputra</p> <p>भारत के एक रूपरेखा मानचित्र पर, निम्नलिखित चिह्नित करें।</p> <p>(□) अंडमान द्वीप समूह (ख) पूर्वी घाट (ग) उज्जैन (घ) पाटलिपुत्र</p> 	4

KENDRIYA VIDYALAYA SANGATHAN / केन्द्रीय विद्यालय संगठन

BENGALURU REGION / बंगलुरु क्षेत्र

SAMPLE QUESTION PAPER / प्रतिदर्श प्रश्न पत्र

TERM II / टर्म II

SESSION 2021-22 / सत्र 2021-22

Class: VII / कक्षा: VII

Max. Marks: 40 / अधिकतम अंक: 40

Sub: Social Science / विषय: सामाजिक विज्ञान

Time: 1.5 hrs./समय:1.5 घंटे

सामान्य निर्देश:

- (i) प्रश्न पत्र में कुल 28 प्रश्न हैं। सभी प्रश्न अनिवार्य हैं।
- (ii) प्रत्येक प्रश्न के सामने अंक दिए गए हैं।
- (iii) क्रमांक 1 से 10 तक के प्रश्न वस्तुनिष्ठ प्रकार के प्रश्न हैं। प्रत्येक प्रश्न एक अंक का होता है।
- (iv) क्रमांक 11 से 20 तक के प्रश्न अति लघु उत्तरीय प्रकार के प्रश्न हैं। प्रत्येक प्रश्न एक अंक का होता है।
- (v) क्रमांक 21 से 26 तक के प्रश्न लघु उत्तरीय प्रश्न हैं। प्रत्येक प्रश्न 2 अंक का होता है।
- (vi) प्रश्न संख्या 27 एक दीर्घ उत्तरीय प्रश्न है जिसमें 4 अंक हैं।
- (vii) (vii) प्रश्न संख्या 28 4 अंकों का मानचित्र प्रश्न है।
- (viii) लघु उत्तरीय और दीर्घ उत्तरीय प्रश्नों में से प्रत्येक में एक आंतरिक विकल्प प्रश्न दिया गया है। आपको ऐसे सभी प्रश्नों में से केवल एक विकल्प का प्रयास करना है।

General Instructions:

- (i) The question paper has **28** questions in all. **All** questions are **compulsory**.
- (ii) Marks are indicated against each question.
- (iii) Questions from serial number **1** to **10** are Objective type questions. Each question carries **one** mark.
- (iv) Questions from serial number **11** to **20** are Very Short Answer type questions. Each question carries **one** mark.
- (v) Questions from serial number **21** to **26** are Short Answer type Questions. Each question carries **2** marks.
- (vi) Question number **27** is a Long Answer type Question carrying **4** marks.
- (vii) Question number **28** is a Map Question of 4 marks
- (viii) One Internal choice question each has been provided in Short Answer and Long Answer Type Question. You have to attempt only **one** of the alternatives in all such questions.



Q1	<p>How many lions are there on the national emblem?  (a) 3 (b) 5 (c) 4 (d) 2  राष्ट्रीय प्रतीक में कितने शेर हैं  (अ) 3 (ब) 5 (स) 4 (द) 2</p>	1
Q2	<p>What was the method of irrigation in ancient time?  (a) Canals (b) Wells (c) Tanks (d) All of these  प्राचीन काल में सिंचाई की विधि क्या थी ?  (अ) नहरें (ब ) कुएं (स ) टैंक (द ) ये सभी</p>	1
Q3	<p>Where is Sanchi is at present  (a) Bihar  (b) Madhya Pradesh  (c) Uttar Pradesh  (d) Himanchal Pradesh  सांची वर्तमान में कहाँ है  (अ) बिहार (ब) मध्यप्रदेश (स) उत्तरप्रदेश (द) हिमाचल प्रदेश</p>	1
Q4	<p>What was the meaning of Kumar-amatya?  (a) Minister  (b) Chief banker  (c) Scribe  (d) Judicial officer  कुमार-अमात्या का क्या मतलब था?  (क) मंत्री  (ख) मुख्य बैंकर  (ग) मुंशी  (घ) न्यायिक अधिकारी</p>	1
Q5	<p>Rajarajeshvara temple built by the  (a) King Rajarajadeva  (b) King Rajadevana  (c) King Rajarajava  (d) King Rajajadeva  राजाराजेश्वर मंदिर द्वारा बनाया गया</p>	

	<p>(क) राजा राजराजदेव  (ख) राजा राजदेवाना  (ग) राजा राजराजवा  (घ) राजा राजाजदेव</p>	
Q6	<p>Which is the largest continent?  (a) Asia  (b) Africa  (c) Australia  (d) None of these  सबसे बड़ा महाद्वीप कौन सा है  (अ) एशिया (ब) अफ्रीका (स) आस्ट्रेलिया (द) इनमें से कोई नहीं</p>	1
Q7	<p>Which one of the following is the youngest folded mountain range in India?  (a) Aravalli Hills  (b) Eastern Ghats  (c) Western Ghats  (d) Himalayas  निम्नलिखित में से भरत में कौनसी पर्वत श्रेणी सबसे कम उम्र की पर्वत शृंखला है-  (अ) अरावली पर्वत (ब) पूर्वी घाट (स) पश्चिमी घाट (द) हिमालय</p>	1
Q8	<p>Who is the head of Tehsil?  (a) District collector  (b) Revenue collector  (c) Ticket collector  (d) All of these  तहसील का मुखिया कौन है?  (क) जिलाधिकारी  (ख) राजस्व कलेक्टर  (ग) टिकट कलेक्टर  (घ) ये सभी</p>	1
Q9	<p>The minimum age of voters in municipal corporation is  (a) 15  (b) 17  (c) 16  (d) 18</p>	1

	नगर निगम में मतदाताओं की न्यूनतम आयु है (अ) 15 (ब) 17 (स) 16 (द) 18	
Q10	What is the main crop of village Kalpattu? (a) Paddy (b) Wheat (c) Sweet corn (d) Sugarcane कल्पट्टू ग्राम की मुख्य फसल क्या है (अ) धान (ब) गेहूं (स) स्वीटकोर्न (द) गन्ना	1
Q11	Read it and answer the Questions. The Mauryan cities had mainly merchants, officials and craftsmen. In the village farmers and herders lived. In forested areas, people gathered forest produce and hunted animals for food. People in different parts of the empire used various different languages. They also probably ate diverse kinds of food and the same can be said about the clothes they wore. Answer these Question- A) Who was the famous Maurya Ruler? B) What you came to know about people's life at the time of Mauryan rule? इसे पढ़ें और सवालों के जवाब दें मौर्य शहरों में मुख्य रूप से व्यापारी, अधिकारी और शिल्पकार थे। गांव में किसान और पशुपालक रहते थे। वन क्षेत्रों में लोगों ने वनोपज इकट्ठा कर जानवरों को भोजन के लिए शिकार किया। साम्राज्य के विभिन्न हिस्सों में लोगों ने विभिन्न विभिन्न भाषाओं का उपयोग किया। उन्होंने शायद विविध प्रकार का भोजन भी खाया और उनके द्वारा पहने गए कपड़ों के बारे में भी कहा जा सकता है। इन सवालों के जवाब- A) प्रसिद्ध मौर्य शासक कौन था? B) मौर्य शासन के समय आपको लोगों के जीवन के बारे में क्या पता चला?	1
Q12	Who were Vellalar? वेल्लालार कौन थे ?	1
Q13	Who was the most powerful ruler of Satavahanas? सतवाहन वंश का सबसे शक्तिशाली राजा कौन था ?	1

	Or Where was the capital of the Chalukya? चालुक्या की राजधानी कहाँ थी ?	
Q14	Write name of two continents lying entirely in the Southern hemisphere. दक्षिणी गोलार्ध में पूरी तरह से अवस्थित दो महाद्वीपों के नाम लिखें।	1
Q15	Name the highest peak in the world. दुनिया के सबसे ऊँची पर्वत चोटी का नाम लिखें।	1
Q16	Who is a Sarpanch? सरपंच कौन है?	1
Q17	Who is the in-charge of a Police Station? पुलिस स्टेशन का प्रभारी कौन है ?	1
Q18	Which body is responsible for local work in the urban areas? शहरी क्षेत्रों में स्थानीय कार्य के लिए कौन सा निकाय जिम्मेदार है ?	1
Q19	How do people in rural areas earn their living? ग्रामीण क्षेत्रों में लोग अपना जीवन यापन कैसे करते हैं ?	1
Q20	Who are salespersons? विक्रेता (सेल्सपरसन) कौन है ?	1
Q21	Why did Ashoka give up fighting wars? अशोक ने युद्ध लड़ना क्यों छोड़ दिया ?	2
Q22	Name the two Tamil epics. दो तमिल महाकाव्यों का नाम लिखें। OR Describe in brief about the Iron Pillar at Mehrauli. मेहरौली लौह स्तंभ के बारे में संक्षेप में लिखें ।	2
Q23	Why is the Northern Hemisphere called the land Hemisphere? उत्तरी गोलार्ध को भूमि गोलार्ध क्यों कहा जाता है ?	2
Q24	How are mountains useful to man? पर्वत मनुष्य के लिए उपयोगी है कैसे ?	2
Q25	What do you understand about Peninsular Plateaus? आप प्रायद्वीपीय पठारों के बारे में क्या समझते हैं	2
Q26	These forests are found in areas of heavy rainfall. They are called evergreen forests because their trees do not shed leaves in a particular period during the year. Thus, they remain green throughout the year. Ebony, mahogany and rosewood are the tree varieties found	2





KENDRIYA VIDYALAYA SANGATHAN / केन्द्रीय विद्यालय संगठनBENGALURU REGION / बंगलुरु क्षेत्रSAMPLE QUESTION PAPER / प्रतिदर्श प्रश्न पत्र

TERM II / टर्म II

SESSION 2021-22 / सत्र 2021-22

Class: VI / कक्षा: VI

Max. Marks: 40 / अधिकतम अंक: 40

Sub: Social science/ सामाजिक विज्ञान

Time: 1.5 hrs. / समय: 1.5 घंटे

**सामान्य निर्देश:**

- (i) प्रश्न पत्र में कुल 28 प्रश्न हैं। सभी प्रश्न अनिवार्य हैं।
- (ii) प्रत्येक प्रश्न के सामने अंक दिए गए हैं।
- (iii) क्रमांक 1 से 10 तक के प्रश्न वस्तुनिष्ठ प्रकार के प्रश्न हैं। प्रत्येक प्रश्न एक अंक का है।
- (iv) क्रमांक 11 से 20 तक के प्रश्न अति लघु प्रकार के प्रश्न हैं। प्रत्येक प्रश्न एक अंक का है।
- (v) क्रमांक 21 से 26 तक के प्रश्न लघु प्रश्न हैं। प्रत्येक प्रश्न 2 अंक का है।
- (vi) प्रश्न संख्या 27 एक दीर्घ उत्तरीय प्रश्न है जिसमें 4 अंक हैं।
- (vii) प्रश्न संख्या 28 एक मानचित्र प्रश्न है। इसके दो भाग 28 (ए) और 28 (बी) हैं। इतिहास से 2 अंकों का 28 (ए) और भूगोल से 2 अंकों का 28 (बी)।
- (viii) लघु उत्तरीय और दीर्घ उत्तरीय प्रश्नों में से प्रत्येक में एक आंतरिक विकल्प प्रश्न दिया गया है। आपको ऐसे सभी प्रश्नों में से केवल एक विकल्प का प्रयास करना है।

**General Instructions:**

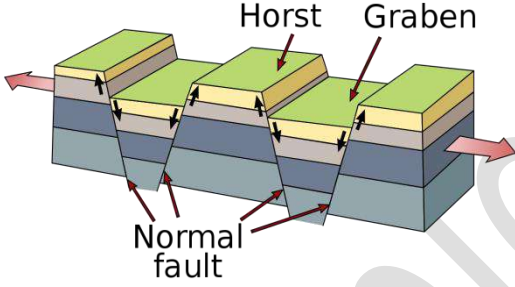
- (i) The question paper has **28** questions in all. **All** questions are **compulsory**.
- (ii) Marks are indicated against each question.
- (iii) Questions from serial number **1** to **10** are Objective type questions. Each question carries **one** mark.
- (iv) Questions from serial number **11** to **20** are Very Short Answer type questions. Each question carries **one** mark.
- (v) Questions from serial number **21** to **26** are Short Answer type Questions. Each question carries **2** marks.
- (vi) Question number **27** is a Long Answer type Question carrying **4** marks.
- (vii) Question number **28** is a Map Question. It has two parts **28(A)** and **28(B)**. **28(A)** of **2** marks from History and **28(B)** of **2** marks from Geography.

(viii) One Internal choice question each has been provided in Short Answer and Long Answer Type Question. You have to attempt only **one** of the alternatives in all such questions.

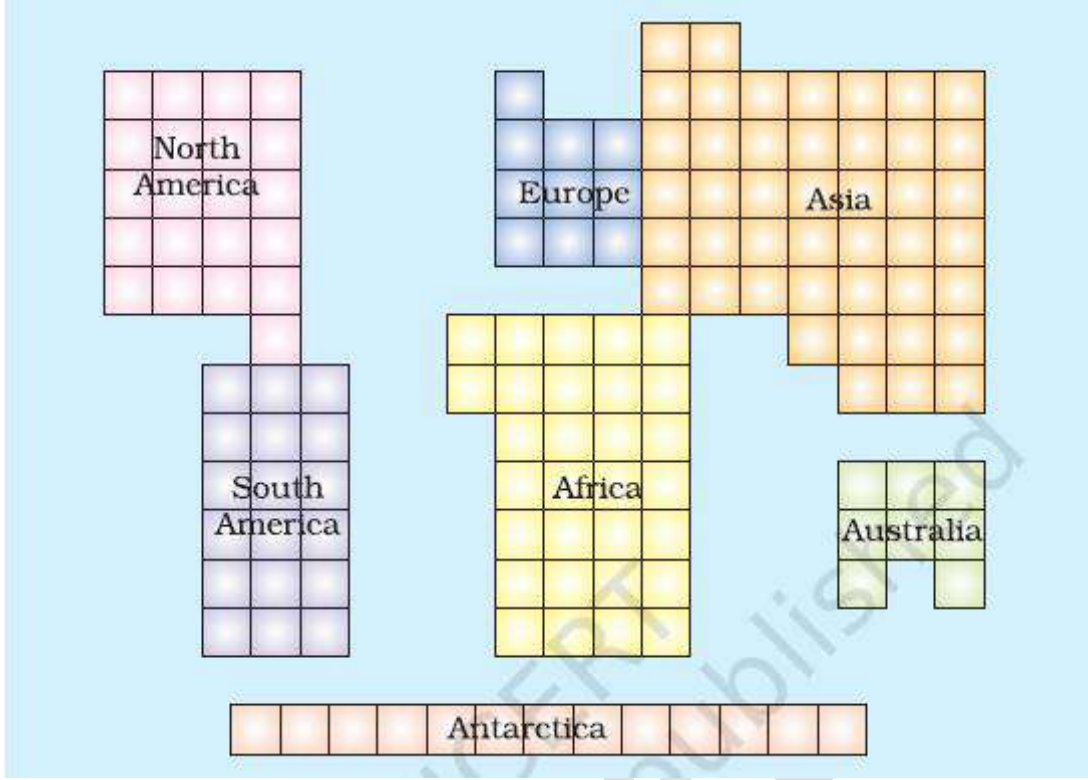
1.	<p>अशोक के दादा का क्या नाम था?</p> <p>a) कृष्ण प्रथम                      b) महावीर</p> <p>c) सिद्धार्थ                              d) चंद्र गुप्ता मौर्य</p> <p>What was the name of grand father of Ashoka</p> <p>a) Krishna I                              b) Mahavira</p> <p>c) Siddhartha                              d) Chandra gupta maurya</p>	1
2.	<p>मनुष्य समुद्र के पानी का उपयोग क्यों नहीं करते ?</p> <p>ए) बहुत मीठा              बी) बहुत नमकीन</p> <p>सी) बहुत प्रदूषित              डी) उपरोक्त में से कोई नहीं</p> <p>Why do humans not use the ocean water ?</p> <p>a) Too sweet                      b) Too salty</p> <p>c) Too polluted                      d) None of the above</p>	1
3.	<p>किस क्षेत्र में भू-स्वामियों को वेल्लालारी के नाम से जाना जाता था</p> <p>a) महाराष्ट्र क्षेत्र      b) पंजाब क्षेत्र</p> <p>सी) तमिल क्षेत्र      डी) कर्नाटक क्षेत्र</p> <p>In which region the land owners were known as vellalar</p> <p>a) Maharashtra region      b) Punjab region</p> <p>c) Tamil region                      d) karanataka region</p>	1
4.	<p>भूमि नापने और भूमि अभिलेख रखने का कार्य कौन करता है ?</p> <p>एक चिकित्सक। बी) रसायनज्ञ</p> <p>ग) पटवारी। डी) पुलिस</p> <p>Who does the work of measuring land and keeping land records ?</p> <p>a) Doctor.                      b) chemist</p> <p>c) patwari.                      d) police</p>	1
5.	<p>सातवाहन का सबसे शक्तिशाली शासक कौन था?</p> <p>a) गौतमी पुत्र सातकर्णी। b) कृष्णा II</p> <p>c) पुलकेशिन II। डी) उपरोक्त में से कोई नहीं</p> <p>Who was the most powerful ruler of satavahanas ?</p> <p>a) Gautami Putra satakarni.                      b) Krishna II</p> <p>c) pulakeshin II.                                      d) none of the above</p>	1
6.	<p>मानव आवास के लिए सबसे उपयोगी क्षेत्र कौन सा है?</p>	





12.	<p>स्थलमंडल से आप क्या समझते हैं ? What do you mean by lithosphere?</p>	1
13.	<p>ग्राम भोजक अक्सर _____ द्वारा अपनी भूमि पर खेती करवाते थे। The Grama bhojaka often got his land cultivated by the _____.</p>	1
14.	<p>तहसीलदार को जिला कलेक्टर के अधीन _____ कार्य के रूप में भी जाना जाता है The Tehsildar also know as _____ work under the district collector</p>	1
15.	<p>सही या गलत लिखें। क) सबसे प्रसिद्ध कुषाण शासक हर्षवर्धन था। Write true or false. a) The most famous kushana ruler was Harshavardhana.</p>	1
16.	<div style="text-align: center;">  </div> <p>फोटोग्राफी को ध्यान से देखें और भूआकृतियों के नाम लिखिए। Look carefully at the photography and name the landforms.</p>	1
17.	<p>निम्नलिखित को पढ़िए और प्रश्न का उत्तर दीजिए। इतनी सारी सेवाएं प्रदान करने और चलाने के लिए बहुत अधिक धन की आवश्यकता होती है। नगर निगम इसे अलग-अलग तरीकों से वसूल करता है। टैक्स वह राशि है जो लोग सरकार द्वारा प्रदान की जाने वाली सेवाओं के लिए सरकार को भुगतान करते हैं। जिन लोगों के पास घर है उन्हें संपत्ति कर के साथ-साथ पानी और अन्य सेवाओं के लिए कर भी देना पड़ता है। Q1. नगर निगम को उसका पैसा कैसे मिलता है ? Read the following and answer the question. Providing and running so many services required a lot of money . The municipal corporation collects this in a different ways . A tax is a sum of money that people pay to the government for the services the government provides. People who own homes have to pay property tax as well as taxes for water and other services.</p>	1

	Q1. How does the municipal corporation get its money ?																					
18.	<p>निम्नलिखित को पढ़िए और प्रश्न का उत्तर दीजिए।  कालिदास को राजा के दरबार में जीवन का चित्रण करने वाले उनके नाटकों के लिए जाना जाता है। इन नाटकों की एक दिलचस्प विशेषता यह है कि राजा और अधिकांश ब्राह्मणों को संस्कृत बोलते हुए दिखाया गया है, जबकि महिलाओं और पुरुषों को अन्य राजा और ब्राह्मण प्राकृत का प्रयोग करते हैं। उनका सबसे प्रसिद्ध नाटक, अभिज्ञान शकुंतलम्,  Q1. कालिदास का सबसे प्रसिद्ध नाटक कौन सा था?</p> <p>Read the following and answer the question.  Kalidasa is known for his plays depicting life in the king's court. An interesting feature about these plays is that the king and most brahmins are shown as speaking Sanskrit, while women and men other than the king and brahmins use Prakrit. His most famous play, Abhijnana Shakuntalam,  Q1. Which was the most famous play written by Kalidasa?</p>	1																				
19.	<p>निम्नलिखित को मिलाएं</p> <table border="0"> <tr> <td>1. तुलसी  </td> <td>क) एक छोटा किसान</td> </tr> <tr> <td>2. सेकर  </td> <td>बी) एक बड़ा किसान</td> </tr> <tr> <td>3. रामलिंगम  </td> <td>स) तमिलनाडु गांव</td> </tr> <tr> <td>4. कलपट्टू  </td> <td>ड) गरीब भूमिहीन मजदूर</td> </tr> </table> <p>Match the following</p> <table border="0"> <tr> <td>1. Thulasi</td> <td> </td> <td>a) A small farmer</td> </tr> <tr> <td>2. sekar</td> <td> </td> <td>b) A large farmer</td> </tr> <tr> <td>3. Ramalingam</td> <td> </td> <td>c) Tamil nadu village</td> </tr> <tr> <td>4. Kalpattu</td> <td> </td> <td>d) Poor landless labour</td> </tr> </table>	1. तुलसी	क) एक छोटा किसान	2. सेकर	बी) एक बड़ा किसान	3. रामलिंगम	स) तमिलनाडु गांव	4. कलपट्टू	ड) गरीब भूमिहीन मजदूर	1. Thulasi		a) A small farmer	2. sekar		b) A large farmer	3. Ramalingam		c) Tamil nadu village	4. Kalpattu		d) Poor landless labour	1
1. तुलसी	क) एक छोटा किसान																					
2. सेकर	बी) एक बड़ा किसान																					
3. रामलिंगम	स) तमिलनाडु गांव																					
4. कलपट्टू	ड) गरीब भूमिहीन मजदूर																					
1. Thulasi		a) A small farmer																				
2. sekar		b) A large farmer																				
3. Ramalingam		c) Tamil nadu village																				
4. Kalpattu		d) Poor landless labour																				
20.	<p>सही या गलत लिखें  सड़कों पर दुकानें आमतौर पर अस्थायी संरचनाएं होती हैं  Write true or false  Shops on Streets are usually temporary structures</p>	1																				
21.	<p>धम्म का परिचय देकर अशोक किन समस्याओं का समाधान करना चाहता था?  कोई दो बिंदु लिखिए।  What were the problems that Ashoka wanted to solve by introducing Dhamma? Write any two points.</p>	2																				

<p>22.</p>	 <p>चित्र देखें और इन सवालों के जवाब दें :-</p> <ol style="list-style-type: none"> <li>1) वे कौन से महाद्वीप हैं जो एक दूसरे से जुड़े हुए हैं?</li> <li>2) वे कौन से महाद्वीप हैं जो एक दूसरे से नहीं जुड़े हैं?</li> </ol> <p>Look at the Diagram and answer these questions</p> <ol style="list-style-type: none"> <li>1) Which are the continents that are connected by one another?</li> <li>2) Which are the continents that are not connected by one another?</li> </ol>	<p>2</p>
<p>23.</p>	<p>पहाड़ और पठार में क्या अंतर है? प्रत्येक 1 अंक में लिखें। What is the difference between a mountain and plateau? write in 1 point each .</p>	<p>2</p>
<p>24.</p>	<p>भारत के प्रमुख भौतिक विभाजन का नाम बताइए। Name the major physical division of India.</p>	<p>2</p>
<p>25.</p>	<p>भारत में विभिन्न ऋतुओं के नाम लिखिए Name the different seasons in India</p>	<p>2</p>
<p>26.</p>	<p>परिभाषित करें 1) गर्भगृह 2) शिखर या तमिल और संस्कृत भाषा के दो महाकाव्य कौन से थे? Define these terms</p>	<p>2</p>

	<p>1) Garbhagriha 2) shikhara OR Which were the two epics of Tamil and Sanskrit language</p>	
27.	<p>इस अवधि के दौरान नई प्रशासनिक व्यवस्थाएँ क्या थीं? समझाना । या पल्लव और चालुक्य कौन थे? उनका विस्तार से वर्णन करें। What were the new administrative arrangements during this period ? Explain . OR Who were the pallavas and the chalukyias ? Describe them in detail.</p>	4
28.	<p>(ए) भारत के एक राजनीतिक मानचित्र में निम्नलिखित का पता लगाएं 1) पाटलिपुत्र 2) उज्जैन (बी) भारत के दिए गए रूपरेखा मानचित्र पर निम्नलिखित का पता लगाएं और चिह्नित करें 1) दक्कन का पठार 2) महान भारतीय मरुस्थल (A) In a political map of India locate these followings 1) Pataliputra 2) Ujjain (B) locate and mark the following on given outline map of India 1) Deccan plateau 2) Great Indian desert</p>	2 2



**KENDRIYA VIDYALAYA SANGATHAN**  
**BENGALURU REGION**  
**SAMPLE QUESTION PAPER - TERM II**  
**SESSION 2021-22**  
**SET - 1**

**Class : VI**  
**Subject : ENGLISH**

**Max. Marks : 40**  
**Time : 2hrs.**

---

**General Instructions:**

The Question Paper contains **THREE** sections.

1. Section A-READING – 10 marks
  2. Section B- WRITING, GRAMMAR & SPELLING- 20 marks
  3. Section C- LITERATURE – 10 marks
- 

**Number your answers correctly. Write the heading of the section you are answering**

**SECTION A – READING**

**Q1. Read the given passage and answer the following questions choosing  
The right option. (1X10)**

Patriotism is an old concept, perhaps sold as the earliest of human civilization. But all through the history of mankind, it has been narrowly understood. Today people have begun to realize that patriotisms an essential part of human instinct.

Patriotism has its negative sides particularly when it exceeds its proper bounds. People who think of their own country to be the best are blind to its weakness are not patriots at all. We are the members of a large human family and so cannot neglect our duties and responsibilities towards it. Our love for the country should be conditioned by respect for the whole community. Narrow prejudice can do nothing except to bring misfortune. In trying to overlook others' interest in the modern world, we harm our own. Patriotism should be tempered with reason so that it may not be an evil.

1. What is the belief of people with regard to Patriotism today?
  - (a) Is not required
  - (b) Is narrowly understood
  - (c) Is only a part of human instinct
  - (d) None of the above
2. Which type of people can be categorised as patriots?
  - (a) Those who think others' country greater than their own
  - (b) Those who keep a neutral attitude towards their country
  - (c) Those who think their own country to be the best in spite of its weakness
  - (d) Those whose love for the country is conditioned by respect for the entire community
3. Narrow prejudices always bring
  - (a) Misfortune
  - (b) Good opportunity

- (c) Good luck
- (d) Huge amount of money

4. Patriotism is an evil when it is
- (a) Tempered with reason
  - (b) Not tempered with reason
  - (c) Beyond narrow feelings
  - (d) None of the above

5. Identify the word which is the opposite to POSITIVE in the paragraph
- (a) Proper
  - (b) Narrow
  - (c) Negative
  - (d) reason



- (a) (b) (c) (d) (e)

6. Name the following freedom fighters choosing the right option .

- (a) Subhas ch Bose , Nehru , Ahalyabai , Baghat Singh, Lal Bahadur Shastri
- (b) Netaji , Vivakananda , Ahalyabai , Baghat Singh, Mangal Pandey
- (c) Rani Lakshami bai, BR Ambedkar, Netaji , Bhagat Singh., Mangal Pandey

7. Negative patriotism leads to \_\_\_\_\_

- (a) Battles
- (b) Terrorism
- (c) Kidnapping

8. Which word is a synonym of prejudice?

- (a) Bias
- (b) Lots
- (c) Part

9. Unsung heroes of a country are

- (a) Patriots who are remembered by their name
- (b) Patriots who are lesser known.
- (c) Patriots who are not remembered



10. If patriotism is love and devotion towards motherland, \_\_\_\_\_ is the act of betrayal of its trust.

- (a) Treachery
- (b) Terrorism
- (c) Communalism

**SECTION B – WRITING, GRAMMAR & SPELLING**

**WRITING (1X5) 5marks**

**2. Answer any one of the following in about 100 words (1X5) 5 marks**

Write a paragraph on ONLINE classes

Hints: What is online learning - how it started- why it was started- process of online learning-advantages- disadvantages-conclusion

OR

You are Radha/ Ramesh of Vidyamandir Higher Secondary school Mysore. You study in Class VI. You have to attend the wedding ceremony of your cousin in your native town. Write a leave letter to your principal requesting him to grant you leave for five days.

**GRAMMAR - (1x10) 10 marks**

**3. Answer the following questions choosing the correct options.**

**(1X10)10 marks**

- i. When I enjoy looking at the photographs I have taken in my new camera, I use my \_\_\_\_\_ intelligence
  - (a) Verbal
  - (b) Visual
  - (c) Interpersonal
- ii. Why don't you \_\_\_\_\_ your ideas on paper?
  - (a) Set up
  - (b) Set out
  - (c) Set down
- iii. Which animal is the \_\_\_\_\_ amongst the five?
  - (a) Tall
  - (b) Taller
  - (c) Tallest
- iv. I stay \_\_\_\_\_ Bangalore \_\_\_\_\_ Jeevan Bima Nagar.
  - (a) In & at
  - (b) At & near
  - (c) In & on

- v. It \_\_\_\_\_ rain in the afternoon so you \_\_\_\_\_ take an umbrella with you.  
(a) May & should  
(b) Might & should  
(c) Could & should
- vi. John said, "I am hungry."  
(a) John said he was hungry.  
(b) John said that he was hungry.  
(c) John told that he is hungry.
- vii. A \_\_\_\_\_ of elephant was seen near the banks of the river yesterday.  
(a) Band  
(b) Herd  
(c) Team
- viii. Re arrange the jumbled words into a meaningful sentence.  
Used to/ Sunil/no/ get/electricity/up /as/with /there/village/the/as/sun/there/was/in/his  
(a) As there was no electricity in his village Sunil used to get with the sun up  
(b) As Sunil used to get up with the sun there was no electricity in his village  
(c) Sunil used to get up with the sun as there was no electricity in his village
- ix. one who does not know how to read or write is called  
(a) uneducated  
(b) illiterate  
(c) foolish
- x. He said that he \_\_\_\_\_ to be invited.  
(a) hopes  
(b) hope  
(c) hopping

**SPELLINGS- (1X5) 5 marks**

4. Identify the words and write them correctly.

A				E		C	
---	--	--	--	---	--	---	--

(a) Clue: onlookers

	N	T		L		E		T
--	---	---	--	---	--	---	--	---

(b) Clue: brain power

(c) Identify the correct spelling

(a) Communicative

(b) Comunicative

(c) Cummanicative

(d) Unscramble the alphabets and identify the word

ODICESMTDATE

Clue: related to pet



(d) It is a \_\_\_\_\_.(Identify the picture.)

**SECTION C – LITERATURE**

5. Read the given lines and answer the questions that follow. (1X3)3 marks

Just as it gets dark in the evening and my  
mother sends me to bed,  
I can see through my open window the  
watchman walking up and down.

(a) Name the poem and the poet?

**(b)** Who is the 'I' in the given lines?

**(c)** Who does 'I' see through the window?

6. Answer the following questions briefly. (any 5)

**1X5 5 marks**

(a) Which is Peter's favourite day? Why

(b) Why was the crocodile's wife annoyed with her husband?

(c) Where was the panchyat held?

- (d) Who really helped Vijay Singh in defeating the ghost?
- (e) How was the fair which Rasheed visited?
- (f) What are sand dunes?
- (g) What crawled inside the speaker's ears in the poem 'Whatif'?
- (h) Why was Prem forced to leave his village?

7. Answer any one of the following. (1X2) 2.

Describe in brief about a dream which left you breathless when you woke up.

OR

What lesson does the fight between the snake and the mongoose teach? Do you think that the snake did the right thing to fight the mongoose? Justify your answer.

\*\*\*\*

SAMPLE PAPER

**KENDRIYA VIDYALAYA SANGATHAN**  
**BENGALURU REGION**  
**SAMPLE QUESTION PAPER - TERM II**  
**SESSION 2021-22**

**SET-2**

**Class : VI**  
**Subject : ENGLISH**

**Max. Marks : 40**  
**Time : 2hrs.**

---

**General Instructions:**

The Question Paper contains **THREE** sections.

1. Section A-READING – 10 marks
  2. Section B- WRITING, GRAMMAR & SPELLING- 20 marks
  3. Section C- LITERATURE – 10 marks
- 

**Number your answers correctly. Write the heading of the section you are answering.**

**SECTION A – READING**

**Q1. Read the given passage. Based on your understanding of the passage, answer by choosing the correct option. (1X10)**

1. Next to water, tea is the most commonly consumed beverage in the world. This is good news because tea offers important health benefits. Its benefits were first discovered by the Chinese Emperor Shen Nung who declared that it gave one vigour of body, contentment of mind and determination of purpose. Today there is ample proof that tea in its many forms possesses a number of health benefits from supporting the immune system to reducing the risk of cancer, to helping prevent tooth decay.

2. What makes tea such a healthy drink? The star compounds are called catechins.

3. Those are antioxidants that help prevent cell damage by harmful molecules called free radicals. Tea can be black, green and red and is derived from warm-weather evergreen trees known as Camelia Sinensis. The more processing tea leaves undergo, the darker they become. Green tea is the least processed tea. It is simply steamed quickly and offers the maximum healing powers because it isn't fermented. It also helps prevent tooth decay and aids weight loss. The largest tea growing area in the world is found in Assam. Also, Assam is the largest contributor of tea in India. Himalayan tea is grown in the Kangra region. In the Nilgiris too,

tea estates have been established since 1835. The Nilgiris Teas are known for their delicate fragrance. Munnar hill station of Idukki district is an important tea region in India with world's best and renowned tea estates. There are 30 tea growing estates in Munnar including Tata Tea. Tea Gardens of Tripura are among the top 10 best tea producing states of India, The climatic conditions and rolling hills of Tripura are suitable for tea plantation and tea tourism in India.

4. People all over the world have been drinking tea for thousands of centuries and for good reason. Numerous studies have shown that a variety of teas may boost the immune system, fight off inflammation, and even ward off cancer and heart disease.

1. Benefits of tea were first discovered by:

- (a) Indians
- (b) Chinese
- (c) Chinese Emperor Shen Nung
- (d) Ancient Chinese medicine

2. Tea turns out to be a healthy drink due to the presence of:

- (a) Catechins
- (b) free radicals
- (c) Antioxidants
- (d) Green colour

3. Which of these statements about the passage is incorrect?

- (a) Green tea leaves offer maximum healing powers.
- (b) People all over the world have been drinking tea for thousands of centuries.
- (c) The largest tea growing area in the world is found in Ooty.
- (d) Tea can be black, green and red.

4. Find the word from para 3 which has a meaning similar to 'graceful/gentle'

Ans \_\_\_\_\_

5. Which of these are not a synonym to 'healing':

- (a) Shattered
- (b) Curative
- (c) Better

(d) Healthy

6 - 10 Match the Statements to their significance.

6	Assam	A	Idukki district
7	Tea Gardens of Tripura	B	Kangra Region
8	Niligiris, Tea Estates	C	Largest contributor of tea
9	Location of Munnar hill station	D	Best tea producing state
10	Himalayan Tea	E	1835

6. \_\_\_\_\_  
7. \_\_\_\_\_  
8. \_\_\_\_\_  
9. \_\_\_\_\_  
10. \_\_\_\_\_

**SECTION B- WRITING, GRAMMAR & SPELLING**

**WRITING (1x5) 5MARKS**

**2. Answer any one of the following in about 100 words (1x5) 5 marks**

You are Ravil / Rashmi, the head boy / girl of Navrang School, Mysore. Your school is organising a puppet show. Draft a notice inviting students who want to join the programme. Put the notice in the box.

**OR**

Write a paragraph on your 'ONLINE LEARNING'.

**GRAMMAR- (1X10) 10 marks**

**3. Answer the following questions choosing the correct options.**

1. Today the weather \_\_\_\_\_ fine, but last week it \_\_\_\_\_ very hot.

- (a) was: is  
(b) were: is  
(c) is: was  
(d) are: were

2. I like getting up early \_\_\_\_\_ the morning.

- (a) at  
(b) in  
(c) on

(d) into

3. \_\_\_\_\_ snakes are quite harmless, but \_\_\_\_\_ are poisonous.
- (a) More: a few
  - (b) Many: more
  - (c) Most: less
  - (d) Most: a few
4. You \_\_\_\_\_ reach the island by land or air; you \_\_\_\_\_ to go by boat.
- a) Can: cannot
  - b) Should: have
  - c) Cannot: have
  - d) Have to: have
5. I saw a cobra \_\_\_\_\_ out of a clump of cactus.
- a) Gliding
  - b) Delving
  - c) Darting
  - d) diving
6. Rita is \_\_\_\_\_ interesting person. She is \_\_\_\_\_ most intelligent.
- a) the: the
  - b) a: the
  - c) an: the
  - d) the: an
7. A fund has been \_\_\_\_\_ for the Covid infected families.
- a) set down
  - b) set in
  - c) set out
  - d) set up
8. A \_\_\_\_\_ of dancers came from Rajasthan.
- a) troupe
  - b) grouping
  - c) team
  - d) crew
9. Which of these orders can make a correct and meaningful sentence.
- (a) Person / a / healthy / exercise / makes



- (c) a / person / exercise / healthy / makes
- (d) Exercise / makes / a / person / healthy
- (e) Makes / healthy / person / a / exercise

10. One who does not know to read and write is :

- a) Educated
- b) Illiterate
- c) Uneducated
- d) Not learned

**SPELLING (1x5) 5 marks**

4. Identify the words and write them correctly.

S	P		C			T		R
---	---	--	---	--	--	---	--	---

(a) Clue: onlooker

	W	E		L
--	---	---	--	---

(b) Clue: bulge / expand

(c) Rearrange the letters to make a meaningful word.

EURCRTEA

Clue: The first letter of the word is given.

Ans: C \_\_\_\_\_

Give the antonym for:

(d) Fortunate : \_\_\_\_\_ ( by using a prefix)

Identify the picture and Write the name:



(e)

							T
--	--	--	--	--	--	--	---

### SECTION C - LITERATURE

#### 5. Read the given lines and answer the questions that follow. (1x3)3 marks

There are two kinds of camels. One, known as the Dromedary, has only a single hump; the other is called a Bactrian camel and has two humps. The humps help the animal to survive in the desert, by acting as storage containers.

- (a) Which of the Camels has two humps?
- (b) What does the hump of the camel store?
- (c) Give the antonym for 'survive'.

#### 6. Answer the following questions briefly. (any 5) (1X5) 5marks

- (a) Who made the pact with the Sun? What message or idea does the story bring to you?
- (b) What happened to the reptiles in the forest? Who was the cause for their act? (**What Happened to the Reptiles**)
- (c) Who does the child envy and why, in the poem '**Vocation**'.
- (d) 'Words are the food and dress of thought'. How are words a wonderful means of communication? (**The Wonderful Words**)
- (e) What decisions were given by Algu Chowdhry and Jumman as head Panch? (**Fair Play**)
- (f) How did the ghost make a plan to trick Vijay Singh finally? (**A Strange Wrestling Match**)
- (g) How was the fair which Rasheed visited?
- (h) Where was the panchyat held?

#### 7. Answer any one of the following. (1x2)2 marks.

What is the significance of a dream? Describe a dream that made you excited.

OR

The author Ruskin Bond describes the Banyan Tree in a magnificent way. In the similar way you can describe a tree in your neighbourhood. You may mention the activities you do around the tree.

\*\*\*\*

SAMPLE PAPER

**KENDRIYA VIDYALAYA SANGATHAN**  
**BENGALURU REGION**  
**SAMPLE QUESTION PAPER - TERM II**  
**SESSION 2021-22**  
**SET -3**

**Class : VI**  
**Subject : ENGLISH**

**Max. Marks : 40**  
**Time : 2hrs.**

---

**General Instructions:**

The Question Paper contains THREE sections.

1. Section A-READING – 10 marks
2. Section B- WRITING, GRAMMAR & SPELLING- 20 marks
3. Section C- LITERATURE – 10 marks

---

**Number your answers correctly. Write the heading of the section you are answering**

**SECTION A – READING**

**Q1. Read the given passage and answer the following questions choosing the right option. (1X10)**

Papaya is a healthy fruit with a list of properties that is long and exhaustive. You can munch on it as a salad, have it cooked or boiled or just drink it up as milkshake or juices. Papaya has many virtues that can contribute to our good health. The most important of these virtues is the protein-digesting enzyme it has. The enzyme is similar to pepsin in its digestive action and is said to be so powerful that it can digest 200 times its own weight in protein. It assists the body in assimilating the maximum nutritional value from food to provide energy and bodybuilding materials.

Papain in raw papaya makes up for the deficiency of gastric juice and fights excess of unhealthy mucus in the stomach and intestinal irritation. The ripe fruit, if eaten regularly corrects habitual constipation, bleeding piles and chronic diarrhoea. The juice of the papaya seeds also assists in the above-mentioned ailments. Papaya juice, used as a cosmetic, removes freckles or brown spots due to exposure to sunlight and makes the skin smooth and delicate. A paste of papaya seeds is applied in skin diseases like those caused by ringworm.

The black seeds of the papaya are highly beneficial in the treatment of cirrhosis of the liver caused by alcoholism, malnutrition, etc. A tablespoonful of its juice, combined with a hint of fresh lime juice, should be consumed once or twice

daily for a month. The fresh juice of raw papaya mixed with honey can be applied over inflamed tonsils, for diphtheria and other throat disorders. It dissolves the membrane and prevents infection from spreading.

**Based on your understanding of the passage, answer by choosing the correct option.**

1. The powerful protein-digesting enzyme in papaya materials to the body by:
  - (a) improving blood circulation
  - (b) It assists the body in assimilating the maximum nutritional from food
  - (c) increasing the resistance power of the body
  - (d) slowing down the process of digestion
  
2. Excess of unhealthy mucus is fought:
  - (a) if ripe papaya is eaten regularly
  - (b) if juice of papaya seeds is taken regularly
  - (c) by papain found in raw papaya which makes up for the deficiency of gastric juice
  - (d) by correcting habitual constipation
  
3. The cosmetic value of papaya is that:
  - (a) it treats skin diseases
  - (b) it makes the skin smooth and delicate
  - (c) it treats cirrhosis of the liver
  - (d) it is helpful in treating chronic Diarrhoea
  
4. Inflamed tonsils can be cured by:
  - (a) Consuming a tablespoonful of papaya juice with a hint of fresh lime juice daily for a month
  - (b) by applying a paste of papaya seeds on the tonsils
  - (c) chewing black seeds of papaya
  - (d) applying fresh juice of raw papaya mixed with honey on the tonsils
  
5. Consuming the black seeds of papaya has proved beneficial in the treatment of liver.....
  - (a) coccyx
  - (b) conjunctivitis
  - (c) cirrhosis
  - (d) chronic

6 .....of papaya seeds is applied in skin diseases like those caused by ringworm.

- (a) juice
- (b) paste
- (c) piece
- (d) chunk

7. The word in the passage meaning the same as 'a lack of' is:

- (a) beneficial
- (b) diarrhoea
- (c) deficiency
- (d) nutritional

8 .The word in the passage meaning the same as soft is:

- (a) chronic
- (b) smooth
- (c) delicate
- (d) cosmetic

9.The word chronic means.....

- (a) that exists for a short time
- (b) continues for a long time
- (c) both (a) and (b)
- (d) none of the above

10. The word 'exhaustive' means:

- (a) comprehensive
- (b) in-depth
- (c) thorough
- (d) all of the above

## **SECTION B – WRITING, GRAMMAR & SPELLING**

### **WRITING (1X5) 5marks**

**2. Answer any one of the following in about 100 words (1X5) 5 marks**

You are Kiran, School Captain of Oxford High School, Bahadurgarh. Draft a notice informing the students about a Poem recitation competition to be held. Put the notice in a box. Write the notice in not more than 50 words.

**OR**

Write a paragraph on –' **The skill/s I picked up during the lock down period.**'

**GRAMMAR - (1x10) 10 marks**

**3. Answer the following questions choosing the correct word from the options given.** **(1X10)10marks**

1. You ..... believe everything you hear; you .....use your own judgement.

- a) can : cannot
- b) should : have
- c) C. cannot : have to
- d) D. cannot : has to

2. He goes to school ..... bus.

- a) on
- b) with
- c) at
- d) by

3. It is ..... interesting story.

- a) an
- b) a
- c) the
- d) none of the above

4. .... is nothing I can do to help you.

- (a) These
- (b) Their
- (c) There
- (d) This

5. I ..... a new dress yesterday.

- (a) bought
- (b) shall buy
- (c) buy
- (d) has bought

6. Students should go ..... the text carefully.

- (a) to
- (b) around
- (c) across
- (d) through

7. Sonali's marks are ..... in the class. (high)

- a) high
- b) higher
- c) the highest
- d) none of these

8. You should buy some woollens before winter \_\_\_\_\_

- a) set up
- b) set aside
- c) set out
- d) set in

9. Which of these orders can make a correct and meaningful sentence.

- a) evening/ music/ I/ listening/ to / like/ the/ in
- b) music / like / the/ I/ evening / listening / in / to.
- c) I /like / listening / to/ music / in/ the/ evening.
- d) in/ the/ evening/ music/ to/ I /like/ listening

10. A fleet of .....

- a) sheep
- b) ships.
- c) elephants
- d) stairs

**SPELLINGS- (1X5) 5 marks**

4. Identify the words and write them correctly.

a.

A	P				R	A			E	S
---	---	--	--	--	---	---	--	--	---	---

Clue: looks

b.

S		T	U				O	N
---	--	---	---	--	--	--	---	---

Clue : condition

c. Rearrange the letters to make a meaningful word:

Clue : The first letter of the word is given.

LLERMASUVO

Ans. M \_\_\_\_\_

d. Give the antonym for :

Different -- \_\_\_\_\_ (by using a prefix)



e. Identify the picture and write the name:



				T			
--	--	--	--	---	--	--	--

### SECTION C – LITERATURE

**5. Read the given lines and answer the questions that follow.(1X3)3marks**

All that you do is match the words  
To the brightest thoughts in your head  
So that they come out clear and true  
And handsomely groomed and fed  
For many of the loveliest things  
Have never yet been said.

- (a) Name the poem and the poet who has written the poem?
- (b) How will your thoughts come out clear and true?
- (c) Write a pair of rhyming words from the lines given above.

**6. Answer the following questions briefly. (any 5) (1X5) 5 marks**

- (a) What kind of changes does Dolma want to bring in society?
- (b) How did the monkey save himself?
- (c) "God lives in the heart of the Panch," the aunt said. What did she mean?
- (d) Write one benefit that our body receives when we sleep?
- (e) Apart from the narrator who were the other two spectators of the classic battle between the mongoose and the cobra ?
- (f) Mention one way in which camels are adapted to the life in deserts?

(g) What wishes does the child in the poem make?

(h) How did the forest become peaceful again?

7. Answer any **ONE** of the following. **(1X2) 2marks**

In what way did the shopkeeper make a fool of Rasheed?

**OR**

What did the specialist prescribe for Saeeda's mother to get well?

\*\*\*\*\*

## KENDRIYA VIDYALAYA SANGATHAN

## BENGALURU REGION

## SAMPLE QUESTION PAPER – TERM – II SESSION 2022

Subject : Sanskrit संस्कृतम्

Max.Marks : 40

Class : VI षष्ठी

Time : 1½ hrs

नाम /NAME		अनुक्रमाङ्कः/ROLL.NO	
विभागः/SECTION		दिनाङ्कः/DATE	
निरीक्षकस्य हस्ताक्षरम्/ INVIGILATOR'S SIGN		प्राप्ताङ्कः/ MARKS OBTAINED	
निर्देशाः - 1. प्रश्नानाम् उत्तराणि प्रश्नपुस्तके एव लेखनीयानि ( प्रश्नों के उत्तर प्रश्नपुस्तिका में ही लिखिए ) 2. सर्वे प्रश्नाः अनिवार्याः । ( सभी प्रश्न अनिवार्य हैं )			

1. अनुच्छेदं पठित्वा प्रश्नानाम् उत्तराणि लिखत ।

वानराः सेतुनिर्माणम् अकुर्वन्। अधुना यदा सेतुबन्धः अभवत् तदा रामस्य, तस्य भ्रातृणाम् च नेतृत्वे च सर्वेषाम् वानराणाम् समस्तसेना लंकाम् प्राविशत्। लंकायाः अधिपतिः रावणः आसीत्। सः निजपुत्रैः बन्धुभिः च सहः युद्धाय तत्परः अभवत्। तदा बहुमासम् यावत् भयंकरम् युद्धम् अभवत्। अन्ते रामः रावणं पराजितवान्। यदा सः मृतः तदा तस्य स्वर्णनिर्मिता अखिला राजधानी विभीषणाय प्रदत्ता।

I) एकपदेन उत्तरत-

1 x 2= 2

1. के सेतु निर्माणम् अकुर्वन्? -----

2. वानराणाम् समस्तसेना कुत्र प्राविशत्? -----

II) एकवाक्येन उत्तरत-

1x1= 1

1. बहुमासं यावत् भयंकरम् किम् अभवत् ?

III)निर्देशानुसारमुत्तरत-

1x2=2

1. "रामस्य" पदे का विभक्तिः? -----

क. षष्ठी ख. सप्तमी ग. पञ्चमी घ. तृतीया

2. "कपयः" इति पदस्य पर्याय किम् ? -----

क. अधुना ख. वानराः ग. रामः घ. सेतुनिर्माणम्

2. चित्राणि दृष्ट्वा वाक्यानि पूरयत

1x5=5

( व्याघ्रः , पुष्पाणि , सूर्यः , वानरः , अश्वः )



1. .... विकसन्ति।



2. .... आकाशे उदेति।



3. .... धावति।



4. .... क्रीडति |



5. .... गर्जति |

3. स्तम्भत्रये दत्तानि पदानि स्वीकृत्य सार्थकवाक्यानि रचयत ।

1x 4= 4

कर्तृपदम्	कर्मपदम्	क्रियापदम्
1 खगाः	उद्याने	नंस्यथ
2 अहम्	आकाशे	नृत्यन्ति
3 यूयं	दूरदर्शनं	उत्पतन्ति

4	मयूराः	शिक्षिकां	पश्यामि
---	--------	-----------	---------

1

2

3

4

प्रश्न 4 - मञ्जूषातः उचितम् अव्ययपदं चित्वा रिक्तस्थानानि पूरयत

1 x 4 = 4

कृत्वा	अपि	उच्चैः	प्रातः
--------	-----	--------	--------

1. मेघाः \_\_\_\_\_ गर्जन्ति ।
2. मोहनः कार्यं \_\_\_\_\_ गृहं गच्छति ।
3. अहं पठामि, त्वम् \_\_\_\_\_ पठ ।
4. .... भ्रमणं उत्तमं भवति।

प्रश्न 5 - मञ्जूषातः विलोमपदानि चित्वा लिखत

1 x 3 = 3

अक्षमम्	दुःखम्	सायम्
---------	--------	-------

1. सुखम् \_\_\_\_\_
2. प्रातः \_\_\_\_\_
3. क्षमम् \_\_\_\_\_

प्रश्न 6 - अनुच्छेदं पठित्वा प्रश्नान् उत्तरत

एकदा दश बालकाः स्नानाय नदीम् अगच्छत्। ते नदीजले चिरं स्नानम् अकुर्वन्। ततः ते तीव्वा पारं गताः। तदा तेषाम् नायकः अपृच्छत्। अपि सर्वे बालकाः नदीम् उत्तीर्णाः? तदा कश्चित् बालकः अगणयत्-एकः, दौ, त्रयः, चत्वार, पञ्च, षट्, सप्त, अष्टौ, नव इति। सः स्वं न अगणयत्। अतः सः अवदत् नव एव सन्ति। दशमः नास्ति।

I) एकपदेन उत्तरत

1x 2 = 2

1. कति बालकाः स्नानाय अगच्छन् ? \_\_\_\_\_

2. ते स्नानाय कुत्र अगच्छन्? \_\_\_\_\_

II) एकवाक्येन उत्तरत

2x1= 2

1. तदा तेषां नायकः किं अपृच्छत् ?

प्रश्न 7. पद्यांशं पठित्वा प्रश्नान् उत्तरत

काकः कृष्णः पिकः कृष्णः को भेदः पिककाकयोः।

वसन्तसमये प्राप्ते काकः काकः पिकः पिकः॥

I) एकपदेन उत्तरत

1 x 2 = 2

i) काकस्य वर्णः कः ? ..... ( कृष्णः \ भेदः )

ii) कस्य वर्णः अपि कृष्णः ? ..... ( काकः \ पिकस्य )

II) पूर्णवाक्येन उत्तरत-

2x1= 2

i) वसन्तसमये कयोः भेदः ज्ञायते ?

प्रश्न 8. निम्नलिखितेभ्यः पदेभ्यः भिन्नप्रकृतिकं पदं चिनुत

1x 4 = 4

1. गावः , सिंहाः , कच्छपाः , गजाः । \_\_\_\_\_

2. लेखनी , पुस्तिका , अध्यापिका , अजा । \_\_\_\_\_

3. पत्राणि , पुष्पाणि , फलानि , मित्राणि । \_\_\_\_\_

4. मयूराः , चटकाः , शुकाः , मण्डूकाः । \_\_\_\_\_

प्रश्न 9. मंजूषातः सामानार्थकानि पदानि चित्वा लिख

1 x 3 = 3

ग्रन्थे	गरुडः	कथने
---------	-------	------

1. वचने \_\_\_\_\_
2. वैनतेयः \_\_\_\_\_
3. पुस्तके \_\_\_\_\_

प्रश्न 10. पद्यांशान् योजयत-

1x 4 = 4

- |                                    |                                    |
|------------------------------------|------------------------------------|
| 1. कथमायसि न भो मम गेहम्           | 1. चन्दिरलोकं प्रविशाम ।           |
| 2. अम्बुदमालाम् अम्बरभूषाम         | 2. प्रिय मातुल वर्धय मे प्रीतिम् । |
| 3. त्वरितमोहि माम् क्ष्रावय गीतिम् | 3. आदायैव हि प्रतियाम् ।           |
| 4. कृत्वा हिमवन्तं सोपानं          | 4. मातुल! किरसि कथं न स्नेहम् ।    |

उत्तराणि =

- 1-----
- 2-----
- 3-----
- 4-----

||\*\*\*\*\*||

SAMPLE PAPER



**KENDRIYA VIDYALAYA SANGATHAN  
BENGALURU REGION**

**SAMPLE QUESTION PAPER – TERM II SESSION 2022**

**Subject : Sanskrit संस्कृतम्**

**Max.Marks : 40**

**Class : VI षष्ठी**

**Time : 1½ hrs**

नाम /Name		अनुक्रमाङ्कः/Roll.No	
विभागः/Section		दिनाङ्कः/Date	
निरीक्षकस्य हस्ताक्षरम्/ Invigilator's Sign		प्राप्ताङ्काः/ Marks Obtained	
निर्देशाः -			
1. प्रश्नानाम् उत्तराणि प्रश्नपुस्तके एव लेखनीयानि ( प्रश्नों के उत्तर प्रश्नपुस्तिका में ही लिखिए )।			
2. सर्वे प्रश्नाः अनिवार्याः। ( सभी प्रश्न अनिवार्य हैं )।			

**1. अनुच्छेदं पठित्वा प्रश्नानाम् उत्तराणि लिखत।**

अस्माकं देशः भारतम्। अयं देशः विशालः वर्तते। अस्य उत्तरस्यां दिशि प्रपञ्चस्य अत्युन्नतः हिमालय पर्वतः वर्तते। भारतस्य पूर्वदिशि वङ्गोपसागरः, दक्षिणे हिन्द महासागरः, पश्चिमे अरब समुद्रः च सन्ति। गङ्गा, यमुना, नर्मदा, गोदावरी, कावेरी इत्यादयः नद्यः अत्र प्रवहन्ति। अनेन कारणेन अस्माकं देशे अन्नस्य समृद्धिः। प्रपञ्चस्य प्राचीनतमा संस्कृतभाषा भारते एव विकसिता। वाल्मीकिः, व्यासः, कालिदासः इत्यादयः कवयः संस्कृते एव काव्यरत्नानि अलिखन्। अस्मिन् देशे हिन्दवः, मोहम्मदीयाः, क्रैस्ताः, बौद्धाः, जैनाः, पारसीकाः च सन्ति। वयं सर्वे अस्य देशस्य उत्तमाः प्रजाः भवामः। जयतु भारतम्।

**अ) एकपदेन उत्तरं लिखत।**

**1x2=2**

1. अस्माकं देशः कः?

\_\_\_\_\_

2. भारते का प्राचीनतमा भाषा विकसिता ?

\_\_\_\_\_

**आ. पूर्णवाक्येन उत्तरं लिखत।**

**1x1=1**

1. भारते काः नद्यः प्रवहन्ति?

इ. निर्देशानुसारम् उत्तरं लिखत।

1x2= 2

1 'सागरः' – अस्य पदस्य समानार्थकपदं किम्? \_\_\_\_\_

अ) सरोवरः                      आ) समुद्रः                      इ) नदी

2 'दक्षिणः' – अस्य विलोमपदं किम्? \_\_\_\_\_

अ)उत्तरम्                      आ)पूर्वः                      इ)पश्चिमः

2. चित्रं दृष्ट्वा मञ्जूषासहाय्येन वाक्यस्य रिक्तस्थानानि पूरयत ।

1x 5 = 5

उत्साहेन, नियमं, गृहात्, पठन्ति, प्रार्थनां

i. बालकाः बालिकाः च प्रातः _____ विद्यालयं गच्छन्ति।	
ii. विद्यालये सर्वे मिलित्वा _____ कुर्वन्ति।	
iii. तदनन्तरं कक्ष्यां गत्वा ध्यानेन _____ ।	
iv. ते क्रीडासमये क्रीडाक्षेत्रं गत्वा _____ क्रीडन्ति।	
v. सर्वे छात्राः सर्वदा _____ पालयन्ति ।	

3. स्तम्भत्रये दत्तानि पदानि स्वीकृत्य सार्थकवाक्यानि रचयत ।

1x 4= 4

	कर्तृपदम्	कर्मपदम्	क्रियापदम्
i.	वानराः (ते)	शिक्षिकां	पश्यामि
ii.	अहम्	वृक्षेषु	नंस्यथ

iii.	यूयं	दूरदर्शनं	लिखसि
v.	त्वम्	लेखं	कूर्दन्ति

1

2

3

4

4. मञ्जूषातः उचितं अव्ययपदं चित्वा रिक्तस्थानानि पूरयत । 1x 4 = 4

- i. बालकाः बालिकाः \_\_\_\_\_ क्रीडाक्षेत्रे क्रीडन्ति।
- ii. सत्यम् \_\_\_\_\_ जयते।
- iii. गङ्गा नदी \_\_\_\_\_ प्रवहति ?
- iv. त्वं जगन्नथपुरीं \_\_\_\_\_ गमिष्यसि?

कुतः, कदा, एव, च

5. मञ्जूषातः उचित -विलोमपदानि चित्वा रिक्तस्थाने लिखत । 1x 3 = 3

दूरे, मूर्खः, अवनतः,

- i. उन्नतः X \_\_\_\_\_
- ii. पार्श्वे X \_\_\_\_\_
- iii. चतुरः X \_\_\_\_\_

6. नाट्यांशं पठित्वा प्रश्नानाम् उत्तराणि लिखत ।

फेकनः-विद्यालये क्रीडास्पर्धाः सन्ति। वयम् अपि खेलिष्यामः।

रामचरणः-किं स्पर्धाः केवलं बालकेभ्यः एव सन्ति?

प्रसन्ना -न हि, बालिकाः अपि खेलिष्यन्ति।

रामचरणः-किं यूयं सर्वे एकस्मिन् दले स्थ ? अथवा प्रथक्-प्रथक् दले ?

प्रसन्ना -तत्र बालिकाः बालकाः च मिलित्वा खेलिष्यन्ति।

फेकनः—आम् ! बैङ्मिण्टन् क्रीडायां मम सहभागिनि जूलि अस्ति।

प्रसन्ना —एतत् अतिरिक्तं कबड्डी, नियुद्धं, क्रिकेटं, पादकन्दुकं, हस्तकन्दुकं चतुरङ्गः इत्यादयः  
स्पर्धाः सन्ति।

अ) एकपदेनउत्तरत -

1x2 = 2

i. कुत्र क्रीडास्पर्धाः सन्ति ? \_\_\_\_\_

ii. बैङ्मिण्टन् क्रीडायां मम सहभागिनी का अस्ति ? \_\_\_\_\_

आ) पूर्णवाक्येनउत्तरत -

2x1 = 2

i. एतद् अतिरिक्तं काः स्पर्धाः भविष्यन्ति?  
\_\_\_\_\_  
\_\_\_\_\_

7. श्लोकं पठित्वा प्रश्नानाम् उत्तराणि लिखत ।

उन्नतवृक्षं तुङ्गं भवनं

क्रान्त्वाकाशं खलुयाम ।

कृत्वा हिमवन्तं सोपानं

चन्दिरलोकं प्रविशाम ॥

अ) एकपदेनउत्तरत -

1x2 = 2

i. भवनं कीदृशम् अस्ति ? \_\_\_\_\_

ii. बालाः किं लोकं प्रविशन्ति? \_\_\_\_\_

आ) पूर्णवाक्येनउत्तरत -

2x1 = 2

i. बालाः कं सोपानं कृत्वा चन्दिरलोकं प्रविशन्ति?  
\_\_\_\_\_  
\_\_\_\_\_

8. घटनाक्रमानुसारं वाक्यानि संयोज्य पुनः लिखत।

1x4= 4

i. अजीजः पेटिकाम् आनयति।

ii. अजीजः एकदा गृहं गन्तुम् अवकाशं वाञ्छति।

iii. पीडितः स्वामि अत्युच्चैः चीत्करोति।

iv. मक्षिके स्वामिनं दशतः।

घटनाक्रमः

1.

- 2.
- 3.
- 4.

9. प्रदत्तेभ्यः शब्देभ्यः संस्कृतपदं ( तत्समपदं ) मञ्जूषातः चित्वा लिखत। 1 x 3 = 3

मक्षिका , कपोतः, कोकिलः

- i. कोयल \_\_\_\_\_
- ii. कबूतर \_\_\_\_\_
- iii. मक्खी \_\_\_\_\_

10. पद्यांशान्योजयित्वा रिक्तस्थाने पुनः लिखत । 1x4 = 4

1. कृषिका कृषको नित्यम् प्रियमातुल ! वर्धय मे प्रीतिम् ।
2. त्वरितमेहि मां श्रावय गीतिम् ग्रहान् हि सर्वान् गणयाम ।
3. दुःखित पीडित कृषिकजनानां शीतकालेऽपि कर्मठौ ।
4. शुक्रश्चन्द्रः सूर्यो गुरुरिति गृहेषु हर्षं जनयाम् ।

उत्तराणि

1. -----
2. -----
3. -----
4. -----

||\*\*\*\*\*||

**KENDRIYA VIDYALAYA SANGATHAN**  
**BENGALURU REGION**  
**SAMPLE QUESTION PAPER – TERM II: SESSION2021-22**

Class: VI

Max.Marks : 40

Subject : Sanskrit

Time : 1½ hrs

नाम /Name		अनुक्रमाङ्कः/Roll.No	
विभागः/Section		दिनाङ्कः/Date	
निरीक्षकस्य हस्ताक्षरम्/ Invigilator's Sign		प्राप्ताङ्काः/ Marks Obtained	
<p>खण्डः (क) अपठित-अवबोधनम् ( Unseen Reading Comprehension) = 05 अङ्काः  खण्डः (ख) रचनात्मकं कार्यम् ( Writing Skills ) = 09 अङ्काः  खण्डः (ग) अनुप्रयुक्तं व्याकरणम् ( Applied Grammar) = 07 अङ्काः  खण्डः (घ) पठित-अवबोधनम् ( Reading Comprehension ) = 19 अङ्काः  आहत्य/Total = 40 अङ्काः</p> <p>निर्देशाः -</p> <ol style="list-style-type: none"> <li>1. अस्मिन् प्रश्नपत्रे उपर्युक्ताः चत्वारः खण्डाः सन्ति ( इस प्रश्नपत्र में उपर्युक्त चार खंड हैं )।</li> <li>2. प्रश्नानाम् उत्तराणि प्रश्नपुस्तके एव लेखनीयानि ( प्रश्नों के उत्तर प्रश्नपुस्तिका में ही लिखिए )।</li> <li>3. सर्वे प्रश्नाः अनिवार्याः ( सभी प्रश्न अनिवार्य हैं )।</li> </ol>			

**खण्डः-क (अपठितअवबोधनम्)-05**

1- अधोलिखितम् अनुच्छेदं पठित्वा प्रश्नानाम् उत्तराणिलिखत -

पुराअयोध्यायाः राजा दशरथः आसीत्। तस्य चत्वारः पुत्राः आसन्। तेषु श्रीरामः प्रथमः आसीत्। श्रीरामस्य पत्नी सीता आसीत्। सत्यस्य पालनाय श्रीरामः वनं गतवान्।

(अ)- एकपदेन उत्तरत -

1x2=2

(क) अयोध्यायाः राजा कः आसीत्? \_\_\_\_\_

(ख) दशरथस्य कति पुत्राः आसन्? \_\_\_\_\_

(आ)- पूर्णवाक्येन उत्तरत -

1x1=1

(क) किमर्थं श्रीरामः वनं गतवान्? \_\_\_\_\_

(इ) - भाषिककार्यम् -

1x2=2

(1) "अस्ति" इतिपदस्य लङ् लकार (भूतकाल) रूपं किम्? \_\_\_\_\_

- (अ) वसन्तिस्म (ब) सन्ति (स) आसन् (द) आसीत्  
 (2) " श्रीरामस्य"इतिपदेकाविभक्ति : ? .....  
 (अ) प्रथमा (ब) षष्ठी (स) चतुर्थी (द) तृतीया

खण्ड: "ख" (रचनात्मककार्यम् ) (09-अङ्काः )

2. चित्राणिदृष्ट्वावाक्यानिपूरयत-

1x5=5

(व्याघ्रः , पुष्पाणि , सूर्यः , वानरः , अश्वः)



1. .... विकसन्ति।



2. .... आकाशेउदेति।



3. .... धावति।



4. .... क्रीडति ।



5. .... गर्जति ।

3. अधोलिखितानिपदानिआधृत्यचत्वारिसार्थकानिवाक्यानिरचयत - 1x4=4

- |           |            |           |
|-----------|------------|-----------|
| 1. यूयम्  | लेखं       | पश्यामि   |
| 2. युवाम् | शिक्षिकां  | पठामि     |
| 3. वयम्   | दूरदर्शनम् | कथयिष्यथः |
| 4. अहम्   | पाठं       | लेखिष्यसि |
| 5. त्वम्  | चित्राणि   | नंस्यथ    |
| 6. अहं    | पुस्तकं    | रचयामः    |

उदाहरणम्-अहं \_\_\_\_\_

पाठं \_\_\_\_\_

पठामि \_\_\_\_\_

1) \_\_\_\_\_

\_\_\_\_\_

\_\_\_\_\_

2) \_\_\_\_\_

\_\_\_\_\_

\_\_\_\_\_

- 3) \_\_\_\_\_
- 4) \_\_\_\_\_
- 5) \_\_\_\_\_

**खण्ड:ग- (अनुप्रयुक्तव्याकरणम्)- 07**

4. मञ्जूषातः उचितं अव्ययपदं चित्त्वारिक्तस्थानानि पूरयत। 1x4=4

इवा एव च उच्चैः

(क) बालकाः बालिकाः ..... क्रीडाक्षेत्रे क्रीडन्ति।

(ख) मेघाः ..... गर्जन्ति।

(ग) बकः हंसः ..... श्वेतः भवति।

(घ) सत्यम् ..... जयते।

5. मञ्जूषातः उचित - विलोमपदानि चित्त्वारिक्तस्थानेषु लिखत। 1x3=3

( पार्श्वे , सायम् , ज्योतिः )

i) प्रातः x .....

ii) तमः x .....

iii) दूरे x .....

**खण्ड:घ- (पठित-अवबोधनम्)- 19**

6. अधोलिखितं अनुच्छेदं पठित्वा प्रश्नानाम् उत्तराणि लिखत- 4

पथिकः तान् अगणयत्। तत्र दश बालकाः एव आसन्। सः नायकम् आदिशत् - 'त्वम् बालकान् अगणय  
|सः तु नव बालकान् एव अगणयत्। तदा पथिकः अवदत् - दशमः त्वम् असि इति। तत् श्रुत्वा प्रहृष्टाः  
भूत्वा सर्वे गृहम् अगच्छन्।



I. एकपदेनउत्तरत-

1x2=2

(i) तत्रकतिबालकाःएवआसन्? .....

(ii) प्रहृष्टाःभूत्वासर्वेकुत्रअगच्छन्?.....

II. पूर्णवाक्येनउत्तरत-

2x1=2

(i) तदा पथिकःकिम्अवदत्? .....

.....

7. अधोलिखितंपद्यांशंपठित्वाप्रश्नानाम्उत्तराणिलिखत-4

सूर्यस्तपतुमेघाःवावर्षन्तुविपुलंजलम्।

कृषिकाकृषिकोनित्यंशीतकालेऽपिकर्मठौ॥

I. एकपदेनउत्तरत-

1x2=2

(i) विपुलंजलंकेवर्षन्ति?.....

(ii) कःतपति? .....

II. पूर्णवाक्येनउत्तरत-

2x1=2

(i) शीतकालेअपिकोनित्यंकर्मठौस्तः?.....

.....

8.भिन्नप्रकृतिकंपदंचित्वाप्रदत्तस्थानेलिखत।

1x4=4

(क) सूर्यः, चन्द्रः, अम्बुदः, शुक्रः \_\_\_\_\_

(ख) जलचरः, खेचरः, भूचरः, निशाचरः \_\_\_\_\_

(ग) पत्राणि, पुष्पाणि, फलानि, मित्राणि \_\_\_\_\_

(घ) मयूराः, चटकाः, शुकाः, मण्डूकाः \_\_\_\_\_

9. पर्यायवाचकान्पदान्चित्वारिक्तस्थानेषुलिखत। 1x3=3

( आकाशे , पृथ्वी , अधिकम् )

१) विपुलम् = ..... २) धरित्री = .....

३) गगने = .....

10 . पद्यांशान्योजयित्वा रिक्तस्थानेषु लिखत।

1x4=4

1	मातुल! किरसि	सितपरिधानम्
2	तारकखचित	श्रावयगीतिम्
3	त्वरितमेहिमां	चन्द्रिकावितानम्
4	धवलंतव	कथंनस्नेहम्

1. ....
2. ....
3. ....
4. ....

\*\*\*\*\*

SAMPLE PAPER

KENDRIYA VIDYALAYA SANGATHAN – BENGALURU REGION

SAMPLE QUESTION PAPER -SET1 -TERM II : SESSION 2021-22

Class- VI

Marks: 40


Subject- Mathematics

Time- 2 Hours

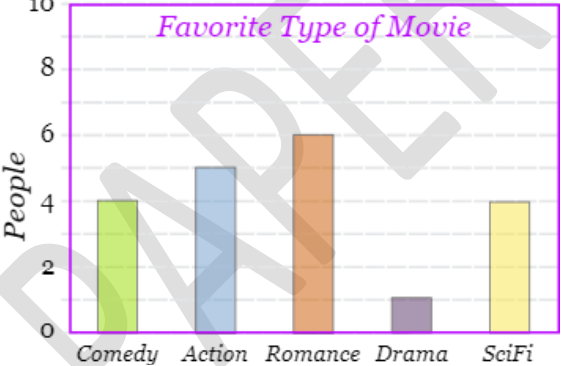
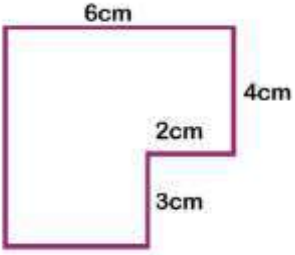
General instructions.

1. This question paper consists of 4 sections(32 questions) .
  2. Section A MCQ and Section B very short Answer type, each question carries 1 mark.
  3. Section C and D consists of 1mark, 2 mark and 3 marks questions.
  4. Internal choice is given in 1 question of 2 mark and 1 question of 3 marks .
- 

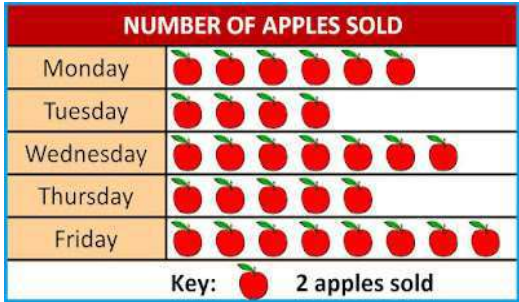
SECTION A

1	What is the number shown by this tally mark? A) 18 B) 24 C) 19 D) 20		1
2	The number of girls in a class is shown by ★★★★★★ in a pictograph. If each ★ represents 10 girls in the class, How many girls are there in the class? A) 6 B) 60 C) 50 D) 600		1
3	What is the area of square of side 7cm? A) 7 sq cm B) 14 sq cm C) 70 sq cm D) 49 sq cm		1

4	<p>What is the perimeter of a rectangle of side <math>x</math> cm and breadth <math>y</math> cm?</p> <p>A) <math>x+y</math>  B) <math>2(x+y)</math>  C) <math>2x+y</math>  D) <math>xy</math></p>	1
5	<p>The algebraic expression for the statement "7 is added to <math>m</math>" is</p> <p>A) <math>7m</math>  B) <math>m+7</math>  C) <math>m-7</math>  D) <math>2m+7</math></p>	1
6	<p>The present age of Ramya is <math>X</math> years ,3 years ago her age was</p> <p>A) <math>3-X</math>  B) <math>X+3</math>  C) <math>3X</math>  D) <math>X-3</math></p>	1
7	<p>There are 15 apples and 25 mangoes in basket, the ratio of apples to mangoes is</p> <p>A) 15:5  B) 3:5  C) 5:3  D) 1:5</p>	1
8	<p>If the cost of 18 pens is Rs.216 ,then the cost of 1 pen is</p> <p>A) Rs.18  B) Rs.38  C) Rs.102  D) Rs.12</p>	1
9	<p>The total number of lines of symmetry for a square is</p> <p>A) 4  B) 3  C) 2  D) none</p>	1
		1

10	<p>The instrument in your geometry box that is used to draw a circle or arcs is</p> <p>A) Divider B) Protractor C) Ruler(scale) D) Compasses</p>													
SECTION B														
11	<p>The bar graph shows the number of people liking different types of movies. Which type of movie is liked by 5 members?</p>  <table border="1" data-bbox="808 632 1365 995"> <caption>Favorite Type of Movie</caption> <thead> <tr> <th>Movie Type</th> <th>Number of People</th> </tr> </thead> <tbody> <tr> <td>Comedy</td> <td>4</td> </tr> <tr> <td>Action</td> <td>5</td> </tr> <tr> <td>Romance</td> <td>6</td> </tr> <tr> <td>Drama</td> <td>1</td> </tr> <tr> <td>SciFi</td> <td>4</td> </tr> </tbody> </table>	Movie Type	Number of People	Comedy	4	Action	5	Romance	6	Drama	1	SciFi	4	1
Movie Type	Number of People													
Comedy	4													
Action	5													
Romance	6													
Drama	1													
SciFi	4													
12	<p>What is the total number of persons whose favorite movies are comedy and Science Fictions(SciFi) in the above bar graph?</p>	1												
13	<p>Find the perimeter of the figure given in the adjacent figure.</p> 	1												
14	<p>A square of 5cm and a rectangle of length 6cm and breadth 3cm, which figure has the greater area the square or rectangle?</p>	1												
15	<p>Choose the solution of the algebraic equation <math>m+10=16</math> from the options (5,6,7,8)</p>	1												
16	<p>Zaheer,s father is 5 years more than 3 times the Zaheer,s age. If Zaheer’s age is <math>p</math> years then write the algebraic expression for the father’s age.</p>	1												

17	If 3, 15, 7 and m are in proportion then find the value of m.	1										
18	Rajesh is 22 years old and Rosline is 55 years old. Find the ratio of their ages.	1										
19	Which among the following geometrical shapes has only one line of symmetry? Equilateral triangle, Rectangle, Isosceles triangle, Square	1										
20	Which of the following angle measure can be constructed using ruler(scale) and compasses $43^\circ$ , $70^\circ$ , $60^\circ$ , $110^\circ$	1										
	SECTION C											
21	What is the perimeter of a rectangle of length 12 cm and breadth 7cm?	1										
22	Determine if the following numbers are in proportion 15, 45, 40 and 120	1										
23	Draw a square of side 4 cm and show its lines of symmetry.	1										
24	Pick the solution from the values given in the bracket next to the equation. Show that the other value do not satisfy the equations Equation $\frac{q}{2}=7$ (7,14)  <b>(OR)</b> Complete the following table and hence write the solution of the equations $m+6=16$	2										
	<table border="1" style="width: 100%; border-collapse: collapse;"> <tr> <td style="width: 20%;">m</td> <td style="width: 20%;">8</td> <td style="width: 20%;">9</td> <td style="width: 20%;">10</td> <td style="width: 20%;">11</td> </tr> <tr> <td>m+6</td> <td></td> <td></td> <td></td> <td></td> </tr> </table>	m	8	9	10	11	m+6					
m	8	9	10	11								
m+6												
		2										


25	The cost of 5m of cloth is Rs.225,find the cost of 12m of cloth.																
26	How many square tiles of side 35cm are required to cover the floor of length 420cm and breadth 140cm?	3															
<b>SECTION D</b>																	
27	 <table border="1" style="margin-left: auto; margin-right: auto;"> <thead> <tr> <th colspan="2">NUMBER OF APPLES SOLD</th> </tr> </thead> <tbody> <tr> <td>Monday</td> <td>6 apples</td> </tr> <tr> <td>Tuesday</td> <td>4 apples</td> </tr> <tr> <td>Wednesday</td> <td>7 apples</td> </tr> <tr> <td>Thursday</td> <td>5 apples</td> </tr> <tr> <td>Friday</td> <td>8 apples</td> </tr> <tr> <td colspan="2">Key:  2 apples sold</td> </tr> </tbody> </table>	NUMBER OF APPLES SOLD		Monday	6 apples	Tuesday	4 apples	Wednesday	7 apples	Thursday	5 apples	Friday	8 apples	Key:  2 apples sold		<p>The pictograph given shows the number of apples sold during week day by a fruit seller.</p> <p>How many more apples were sold on Friday compared Tuesday?</p>	1
NUMBER OF APPLES SOLD																	
Monday	6 apples																
Tuesday	4 apples																
Wednesday	7 apples																
Thursday	5 apples																
Friday	8 apples																
Key:  2 apples sold																	
28	The present age of Suprit is $z$ years and his father's present age is $3z+8$ . If Suprits age after 2 years is 11 years. What is his fathers present age	1															
29	Rajesh has drawn a line segment AB of length 7.5cm, and another line segment CD of some length. He constructed a line segment XY of length 19 cm whose length is equal to the sum of lengths of line segments AB and CD. What is the length of line segment CD?	1															
30	Construct the angle AOB of measure $60^\circ$ ,using ruler and compasses.	2															
31	Write any four English alphabets having vertical line of symmetry. And show their line of symmetry	2															






32

The following table shows the number of persons taken vaccination against covid-19 in a hospital on a week days. Represent the data in the form of bar graph .(use scale 1cm=5 persons)

Week day	Number of persons
Monday	15
Tuesday	25
Wednesday	30
Thursday	40
Friday	20

(OR)

The following pictograph shows the number of runs scored by 5 players in a cricket match. (  =20 runs)

Name of the player	Runs scored
Roslin	
Hafeeda Fatima	
Karishma Singh	
Ragini Rajput	
Renuka Kadam	

Now answer the following question based on above data.

- 1 Who scored the highest runs? How many runs did she score?
2. What is the total of runs scored by Ragini Rajput and Roslin?
- 3.What is difference in runs between the highest and the least scorers?

3



KENDRIYA VIDYALAYA SANGATHAN – BENGALURU REGION

SAMPLE QUESTION PAPER -TERM II : SESSION 2021-22

Class- VI

SET 2

Marks: 40

Subject- Mathematics

Time- 2 Hours

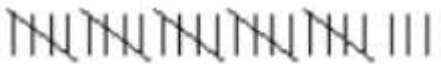
General instructions.

1. This question paper consists of 4 sections .
2. Section A and B consists of Very Short Answer questions of 1 mark each.
3. Section C and D consists of 1 mark , 2 mark and 3 marks questions.
4. Internal choice is given in 1 question of 2 mark and 1 question of 3 marks .

SECTION-A

Choose the correct answer from the bracket. (Q1 to Q10)

1x10=10


1.	<p>The tally mark  represent the number</p> <p>(a)25 (b) 26 (c) 28 d) 27</p>												
2.	<p>Observe the table and answer the question</p> <table border="1" data-bbox="316 1239 982 1648"><thead><tr><th><b>Blood groups</b></th><th><b>Number of students</b></th></tr></thead><tbody><tr><td>A</td><td>9</td></tr><tr><td>B</td><td>6</td></tr><tr><td>O</td><td>12</td></tr><tr><td>AB</td><td>3</td></tr><tr><td>Total</td><td>30</td></tr></tbody></table> <p>Which blood group is the most common?</p> <p>(a) A (b) B (c) O (d) AB</p>	<b>Blood groups</b>	<b>Number of students</b>	A	9	B	6	O	12	AB	3	Total	30
<b>Blood groups</b>	<b>Number of students</b>												
A	9												
B	6												
O	12												
AB	3												
Total	30												
3.	<p>Perimeter of a square = _____x length of a side</p> <p>(a) 1 (b) 2 (c) 3 (d) 4</p>												

4.	If the length of side of a square is 2 cm then its area is (a) 8cm (b)8 sq cm (c) 4cm (d) 4 sq cm
5.	The rule which gives the number of match sticks required to make the matchstick pattern <b>V</b> is (a) 2n (b) 3n (c) 4n (d) 5n
6.	'8k + 1' is same as (a) 1 is added to 8 times k (b) k is added to 8 times 1 (c) 8 is added to k times 1 (d) 8 is added to 1 time k
7.	In a class there are 20 boys and 40 girls . the ratio of the number of boys to the number of girls is (a) 1 : 4 (b) 1: 2 (c) 2 : 1 (d) 4 :1
8.	Which of the following ratio is not equivalent to 30 : 90 ? (a) 3 : 9 (b) 1 : 3 (c)15 :45 (d) 1 : 6
9.	Alphabet <b>H</b> has _____ lines of symmetry? (a) 2(b) 3(c) 4(d) 5
10.	Two lines are said to be perpendicular to each other , when they meet at _____ angle. (a) acute (b) obtuse (c) right (d) straight

**SECTION –B**

Do as directed. (Q11-Q20)

1x10=10

11.	If  = 5 students, how will you represent 25 students in a pictograph.
-----	--

12.

Read the following table:

Favorite Game	
Name of game	Number of students
Cricket	
Football	
Hockey	
Basketball	
Volley ball	

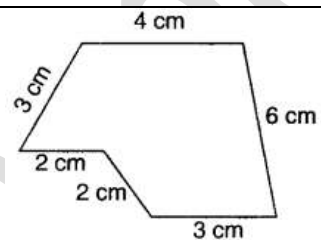
What is the difference in number of students who like football and hockey?

13.

Find the perimeter of an isosceles triangle with equal sides 8 cm each and third side 6 cm.

14.

Find the perimeter of the given figure.



15.

Find the ratio of 40cm to 1m

16.

Write the expression for 10 is subtracted from the result of 'p' divided by 5'

17.

The cost of 1 book is ₹ 10 , then the cost of 'n' such books will be \_\_\_\_\_.

18.

The cost of a dozen banana is ₹ 60 and the cost of 6 oranges is ₹ 18. Find the ratio of the cost of a banana to the cost of an orange.

19.

A square has \_\_\_\_\_ lines of symmetry.

20.


X and Y are two distinct points in a plane .How many lines can be drawn passing through both X and Y ?

## SECTION C

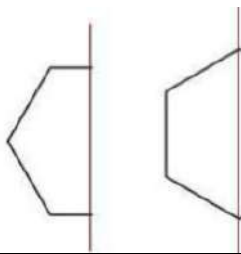
Do as directed

<b>21.</b>	Amla went to a park 200m long and 100m wide. She took one complete round of the park. Find the distance covered by Amla. <span style="float: right;">(1)</span>
<b>22.</b>	If $3 : 4 :: x : 8$ , find $x$ <span style="float: right;">(1)</span>
<b>23.</b>	Which type of triangle has exactly one line of symmetry? <span style="float: right;">(1)</span>
<b>24.</b>	Find the ratio of 30 minutes to 1.5 hours <span style="float: right;">(2)</span>
<b>25.</b>	Give expression for the following <span style="float: right;">(2)</span>
<b>(a)</b>	Sum of 7 and $y$
<b>(b)</b>	Number $x$ multiplied by $(-3)$
(OR)	
<b>(a)</b>	Pick out the solution for the equation from the values given in the bracket $m - 10 = 6$ $( 16, 15, 26, 4 )$
<b>(b)</b>	$15p = 60$ $( 4, 10, 3, 5 )$
<b>26.</b>	Rahul wants to paint all the four square walls of his room of side 10 m. If the cost of painting is ₹20 per sq m then what will be the total cost of painting? <span style="float: right;">(3)</span>

## SECTION D

<b>27.</b>	If the marks of 5 students out of 50 in a math exam are 45 , 32 , 47 , 21 , 42 Find the difference between maximum and minimum marks. <span style="float: right;">(1)</span>
<b>28.</b>	The side of a regular pentagon is $S$ . Its perimeter is _____. <span style="float: right;">(1)</span>
<b>29.</b>	Name the instrument which is used to draw and measure angles. <span style="float: right;">(1)</span>
<b>30.</b>	Complete the alphabets whose one half and axis of symmetry is given <span style="float: right;">(2)</span>
	

(OR)



**31.** Draw a circle of radius 5 cm and mark its centre O . Label the following parts:  
a) radius OA  
b) diameter BC (2)

**32.** This is a pictograph showing rainfall in cm of different cities named ( A ,B, C,D ,E and F ) during the current year. On the basis of the pictograph answer the following questions: (3)



this symbol represents 25 cm. of rainfall.

City A	
City B	
City C	
City D	
City E	
City F	

- (1) In which city did maximum rainfall occur ?
- (2) In which city did minimum rainfall occur?
- (3) How much more rainfall did the city A recorded than city F?

KENDRIYA VIDYALAYA SANGATHAN – BENGALURU REGION

SAMPLE QUESTION PAPER -TERM II : SESSION 2021-22

Class- VI

SET 3

Marks: 40

Subject- Mathematics

Time- 2 Hours

General instructions.

1. This question paper consists of 4 sections.
2. Section A (MCQ) and B consist of Very Short Answer questions of 1 mark each.
3. Section C and D consists of 1 mark, 2 mark and 3 marks questions.
4. Internal choice is given in 1 question of 2 mark and 1 question of 3 marks.

SECTION-A

Choose the correct answer from the bracket. (Q1 to Q10)

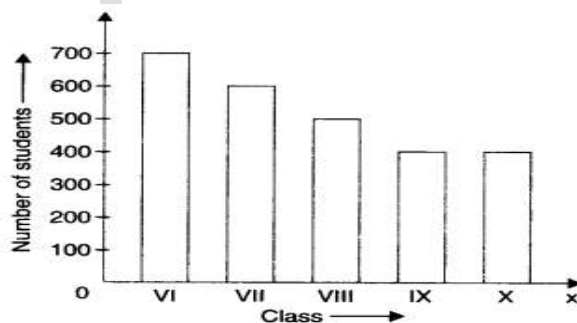
1x10=10

1. Sonu collected the data for size of shoes of students in her class VI B and prepared a table using tally marks.

Shoe size	Tally marks	Number of students
4		5
5		8
6		10
7		7
8		2

What is the size of shoes worn by the maximum number of students?  
(a) Size 10 (b) Size 6 (c) Size 8 (d) Size 7

2. The following bar graph show the number os students from class VI to class X of a school. In which class is the number of students 500?

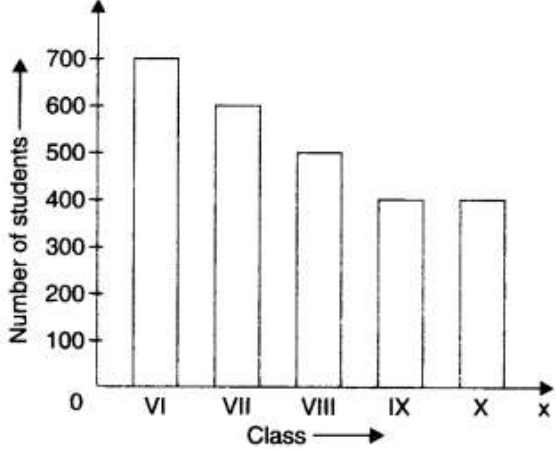



	(a) Class VI (b) Class VII (c) Class VIII (d) Class IX
3.	The perimeter of an equilateral triangle of side 1m is (a) 1m (b) 2m (c) 3m (d) 6m
4.	The area of a square of side 1cm is (a) 1sq cm (b) 2 sq cm (c) 4sq cm (d) 1sq m
5.	The rule which gives the number of match sticks required to make the matchstick pattern <b>W</b> is (a) 2n (b) 3n (c) 4n (d) 5n
6.	The radius of a circle is $r$ . Its diameter is (a) 2r (b) 3r (c) 4r (d) 5r
7.	The ratio of 50cm to 1m is (a) 50:1 (b) 1:50 (c) 1:2 (d) 2:1
8.	Which of the following are in proportion? (a) 2 , 3 , 20 , 30 (b) 3 , 4 , 6 , 12 (c) 2 , 5 , 8 , 10 (d) 1 , 2 , 3 , 4
9.	Which of the following letter has no line of symmetry? (a) <b>O</b> (b) <b>X</b> (c) <b>A</b> (d) <b>Q</b>
10.	<b>X</b> and <b>Y</b> are two distinct points in a plane .How many lines can be drawn passing through both <b>X</b> and <b>Y</b> ? (a) 0 (b) 1 (c) 2 (d) infinite


**SECTION –B**

Do as directed. (Q11-Q20)

1x10=10

<b>11.</b>	If 😊 = 4 students, how will you represent 24 students in a pictograph.
<b>12.</b>	 <p>The above graph shows number of students in 5 different classes. What is the difference between number of students in classes with maximum and minimum number of students ?</p>
<b>13.</b>	Find the area of a rectangle of length 12cm and breadth 7cm
<b>14.</b>	Find the distance travelled by Sangeetha if she takes 5 rounds of a square park of side 10m
<b>15.</b>	 <p>Find the ratio of number of circles to number of squares.</p>
<b>16.</b>	Write the expression for ' p multiplied by 2 '
<b>17.</b>	If Meenu's present age is z years , what was her age 10 years back?
<b>18.</b>	There are 20 teachers in a school of 500 students. Find the ratio of number of teachers to number of students.



19.	<p>How many lines of symmetry does the given figure with all sides equal have?</p> 
20.	<p>Two lines are said to be perpendicular to each other, when the angle formed between them is a _____ angle.</p>

SECTION C

Do as directed




























21.	<p>Find the perimeter of a square whose side is 7cm . (1)</p>
22.	<p>Write an equivalent ratio for <b>2:3</b> (1)</p>
23.	<p>How many lines of symmetry does the letter <b>M</b> have? (1)</p>
24.	<p>Find the ratio of 500 ml to 2 litres (2)</p>
25.	<p>Give expression for the following (2)</p> <p>(a) <b>8</b> subtracted from <b>y</b></p> <p>(b) <b>7</b>times <b>x</b> to which <b>3</b> is added</p> <p style="text-align: center;">(OR)</p> <p>(a) Pick out the solution for the equation from the values given in the bracket  <math>m + 10 = 16</math>      ( -6, 5 , 6 , 4 )</p> <p>(b) <math>5p = 60</math>      (10 , 11 , 12 , 55 )</p>
26.	<p>Find the perimeter of each of the following shapes (3)</p> <p>(a) A triangle of sides 6cm,7cm and 8 cm.</p> <p>(b) An equilateral triangle of side 12cm.</p> <p>(c) An isosceles triangle with equal side 8cm each and third side 6cm.</p>

**SECTION D**

- 27.** A survey of 120 school students was done to find which activity they prefer to do in their free time. (1)

Preferred activity	Number of students
Playing	45
Reading story books	30
Watching TV	20
Listening to music	10
Painting	15

Which activity is preferred by most of the students other than playing?

28.	The salary of Hari is 2 times the salary of Manish which is ₹ y, then represent the salary of Hari . (1)																											
29.	Name the instrument which is used to draw and measure angles. (1)																											
30.	<p>Draw two objects from nature which shows symmetry. (2)</p> <p>(OR)</p> <p>Draw two alphabets each which have</p> <p>a) vertical line of symmetry.</p> <p>b) Horizontal line of symmetry.</p>																											
31.	Draw a line segment of length 9 cm and construct its perpendicular bisector. (2)																											
32.	<p>The number of girl students in each class of a co-educational middle school is depicted by the pictograph:</p> <table border="1" data-bbox="305 898 1045 1260"> <thead> <tr> <th>Classes</th> <th>Number of girl students</th> <th> - 4 Girls</th> </tr> </thead> <tbody> <tr> <td>I</td> <td></td> <td></td> </tr> <tr> <td>II</td> <td></td> <td></td> </tr> <tr> <td>III</td> <td></td> <td></td> </tr> <tr> <td>IV</td> <td></td> <td></td> </tr> <tr> <td>V</td> <td></td> <td></td> </tr> <tr> <td>VI</td> <td></td> <td></td> </tr> <tr> <td>VII</td> <td></td> <td></td> </tr> <tr> <td>VIII</td> <td></td> <td></td> </tr> </tbody> </table> <p>i) How many girls are there in class VII ?</p> <p>ii) Which class has the minimum number of girl students?</p> <p>iii) Which class has the maximum number of girl students?</p>	Classes	Number of girl students	 - 4 Girls	I			II			III			IV			V			VI			VII			VIII		
Classes	Number of girl students	 - 4 Girls																										
I																												
II																												
III																												
IV																												
V																												
VI																												
VII																												
VIII																												

\*\*\*\*\*

केंद्रीय विद्यालय संगठन, बंगलूरु संभाग  
प्रतिदर्श प्रश्न -पत्र (सत्र-2)  
2021-22

कक्षा-6

समय : 2

घंटे विषय : हिंदी

पूर्णांक : 40

सामान्य निर्देश

इस प्रश्न पत्र में चार खंड हैं - क, ख, ग, घ

सभी खंडों के उत्तर देना अनिवार्य है।

सभी प्रश्नों के उत्तर क्रमानुसार लिखिए।

प्रश्न पत्र को पढ़ने के लिए 15 मिनट का अतिरिक्त समय दिया जाएगा।

खंड 'क'

1. निम्नलिखित गद्यांश को पढ़कर पूछे गए प्रश्नों के उत्तर लिखिए :-

1x5=5

संसार में सबसे मूल्यावान वस्तु समय है क्योंकि दुनिया की अधिकांश वस्तुओं को घटाया-बढ़ाया जा सकता है, पर समय का एक क्षण भी बढ़ा पाना व्यक्ति के बस में नहीं है। समय के बीत जाने पर व्यक्ति के पास पछतावे के अलावा कुछ नहीं होता। विद्यार्थी के लिए तो समय का और भी अधिक महत्व है। विद्यार्थी जीवन का उद्देश्य है शिक्षा प्राप्त करना। समय के उपयोग से ही शिक्षा प्राप्त की जा सकती है। जो विद्यार्थी अपना बहुमूल्य समय खेल-कूद, मौज-मस्ती तथा आलस्य में खो देते हैं वे जीवन भर पछताते रहते हैं, क्योंकि वे अच्छी शिक्षा प्राप्त करने से वंचित रह जाते हैं और जीवन में उन्नति नहीं कर पाते। मनुष्य का कर्तव्य है कि जो क्षण बीत गए हैं, उनकी चिंता करने के बजाय जो अब हमारे सामने हैं, उसका सदुपयोग करें।

- (क) समय को सबसे अमूल्य वस्तु क्यों कहा गया है ?  
(ख) विद्यार्थी जीवन का उद्देश्य है ?  
(ग) विद्यार्थी जीवन भर क्यों पछताते रहते हैं ?  
(घ) समय के संबंध में व्यक्ति का क्या कर्तव्य बताया गया है ?  
(ङ) उपर्युक्त गद्यांश का उपयुक्त शीर्षक सुझाइए ।

खंड 'ख'

2. निम्नलिखित पद्यांश को पढ़कर पूछे गए प्रश्नों के उत्तर लिखिए :-  $1 \times 5 = 5$

अपने कर से खिला, धुला मुख,  
धूल पोंछ, सज्जित कर गात,  
थमा खिलौने, नहीं सुनाती,  
हमें सुखद परियों की बात !

- क) कविता और कवि का नाम लिखिए ।  
ख) छोटे बच्चे के लिए माँ क्या-क्या कार्य करती है ?  
ग) बड़े होने पर माँ क्या नहीं सुनाती ?  
घ) बच्ची क्या चाहती है ?  
ङ) दो पर्यायवाची लिखिए - गात

3.(क) निम्नलिखित प्रश्नों में से किन्हीं तीन के उत्तर लिखिए :-  $2 \times 3 = 6$

- i) दुनिया का पुराना हाल किन चीज़ों से जाना जाता है? कुछ चीज़ों के नाम लिखिए ।  
ii) "लोकगीत" नामक निबन्ध के आधार पर तुम लोकगीतों की कौन-सी विशेषताएँ बता सकते हो?  
iii) आश्रम में कॉलेज के छात्रों से गांधी जी ने कौन सा काम करवाया और क्यों ?

iv) “जिन लोगों के पास आँखें हैं, वे सचमुच बहुत कम देखते हैं” –हेलेन केलर को ऐसा क्यों लगता था ?

(ख) निम्नलिखित प्रश्नों में से कोई एक प्रश्न का उत्तर लिखिए :- 2x1=2

i) नगर से बाहर निकलकर दो पग चलने के बाद सीता की क्या दशा हुई?

ii) तुम्हारी माँ तुम लोगों के लिए क्या-क्या काम करती है ?

(ग) निम्नलिखित प्रश्नों में से कोई एक प्रश्न का उत्तर लिखिए :- 2x1=2

i) राम और सुग्रीव की स्थिति एक जैसी थी, स्पष्ट कीजिए ।

ii) मेघनाद कौन थे? उनका दूसरा नाम भी लिखिए ।

खंड 'ग'

4. निर्देशानुसार उत्तर दीजिए :-

1x10=10

क) तुरही भारत के कई प्रान्तों में प्रचलित है । यह दिखने \_\_\_\_\_ अंग्रेज़ी के एस या सी अक्षर \_\_\_\_\_ तरह होती है । (उचित कारक चिह्न से पूरा करो )

ख) भाववाचक संज्ञा बनाइए :- मीठा ; बहना

ग) अर्थ लिखकर दिए गए शब्दों में अंतर स्पष्ट कीजिए :- निधन -निर्धन

घ) विशेषण बनाइए :- पत्थर ; ज़हर

ड.) मुनिया ने सपना देखा \_\_\_\_\_ वह चन्द्रमा पर बैठी है ।

(उचित योजक से पूरा करो-की / कि )

च) प्रत्यय अलग कीजिए :- पिसाई , बुनावट

छ) लिंग बताइए :-- रोशिनी, पतीला

ज) वाक्य प्रयोग द्वारा अर्थ अंतर स्पष्ट कीजिए :- दिन-दीन

झ) लोक -शब्द से दो नए शब्द बनाइए ।

ट) उचित संज्ञा से पूरा करो - रसीला \_\_\_\_\_ ; चमकीला \_\_\_\_\_

5. निर्देशानुसार उत्तर दीजिए :-

1x5=5

क) विलोम शब्द लिखिए :-- आशा ; सुख

ख) दो पर्याय लिखिए :- पृथ्वी

ग) एक शब्द लिखिए :- पंचों में प्रमुख ; एक तार वाला वाद्य यंत्र

घ) लोकगीत सीधे जनता \_\_\_\_\_ संगीत हैं | इनके लिए साधना \_\_\_\_\_ ज़रूरत नहीं होती | (उचित परसर्ग से --

का ,के, की - से पूरा करो )

ड.) सही शब्द अलग कीजिए :- आशीर्वाद / आर्शीवाद ; आस्रम / आश्रम

खंड 'घ'

6. पेड़-पौधों के महत्व के विषय में दो मित्रों की बातचीत को संवाद के रूप में लिखिए | (5)

अथवा

ऑनलाइन कक्षाओं के बारे में दो छात्रों की बातचीत को संवाद के रूप में लिखिए |

\*\*\*\*\*

\*\*\*

केंद्रीय विद्यालय संगठन, बेंगलूरु संभाग  
प्रतिदर्श प्रश्न -पत्र (सत्र-2)

2021-22

कक्षा-6

विषय : हिंदी

समय : 2 घंटे

पूर्णांक : 40

सामान्य निर्देश

इस प्रश्न पत्र में चार खंड हैं - क, ख, ग, घ

सभी खंडों के उत्तर देना अनिवार्य है।

सभी प्रश्नों के उत्तर क्रमानुसार लिखिए।

प्रश्न पत्र को पढ़ने के लिए 15 मिनट का अतिरिक्त समय दिया जाएगा।

खंड 'क'

1. नीचे लिखे गए गद्यांश को ध्यान पूर्वक पढ़कर पूछे गए प्रश्नों के उत्तर दीजिए

1X5 = 5

सुनैना के यहां कई बच्चे पैदा हुए परंतु सब के सब बचपन में ही मर गए। केवल अंतिम पुत्र सूरज जीवित रहा। सूरज उसकी जिंदगी का सहारा था। उसे देखकर वह बाकी बच्चों की मौत का गम भूल जाती थी। सूरज का रंग रूप बहुत साधारण था, लेकिन सुनैना की नजर में वैसा बच्चा सारी दुनिया में नहीं था। सुनैना को उसकी इतनी फिक्र थी कि वह उसे हमेशा सीने से लगाए रहती थी। मानो वह कोई दीया हो जो हवा से बुझ जाएगा। वह उसे दूसरों से बचाकर रखती थी कि कहीं उसे किसी की नजर ना लग जाए। वह उसे खेलने के लिए भी कहीं नहीं जाने देती थी। यदि सूरज कहीं चला जाता तो सुनैना परेशान होकर उसे खोजने लगती थी।



- क. सुनैना के अंतिम पुत्र का क्या नाम था?  
ख. सूरज का रंग रूप कैसा था?  
ग. यदि सूरज कहीं चला जाता तो सुनैना क्या करती थी?  
घ. साधारण का विलोम शब्द लिखिए।  
घ. इस गद्यांश का उपयुक्त शीर्षक लिखिए।

खंड 'ख'

प्रश्न 2 .नीचे लिखे गए पद्यांश के आधार पर पूछे गए प्रश्नों के उत्तर लिखिए  
1X5=5

मैं सबसे छोटी होऊं,  
तेरी गोदी में सोऊं,  
तेरा अंचल पकड़ पकड़कर  
फिरूं सदा मां! तेरे साथ,  
कभी ना छोड़ू तेरा हाथ!

- क. कविता के कवि का नाम लिखिए।  
ख. बच्ची किसकी गोद में सोना चाहती है?  
ग. बच्ची क्या करना चाहती है?  
घ. छोटी शब्द का विलोम शब्द बताइए।  
ड. मां के पीछे पीछे घूमने के लिए बच्ची क्या पकड़ती है?

3. नीचे दिए गए प्रश्नों में से किसी 3 प्रश्नों के उत्तर दें। 2X3=6

- क. किंतु काल गति चुपके चुपके काली घटा घेर लाई। झांसी की रानी पाठ के आधार पर बताइए कि इन पंक्तियों में किस घटना की ओर संकेत किया गया है।  
ख. प्रकृति का जादू किसे कहा गया है?  
ग. लाखों करोड़ों वर्ष पहले हमारी धरती कैसी थी?  
घ. लंदन में भोज पर बुलाए जाने पर गांधी जी ने क्या किया?

4. नीचे दिए गए प्रश्नों में से किसी 1 प्रश्न का उत्तर संक्षेप में लिखिए।

2X1=2

क. नगर के बाहर निकल कर दो पग चलने के बाद सीता की क्या दशा हुई?

ख. कविता में सबसे छोटे होने की कल्पना क्यों की गई है?

5. नीचे दिए गए प्रश्नों में से किसी 1 प्रश्न का उत्तर संक्षेप में लिखिए। 2X1=2

क. सोने का हिरण का रूप किसने धारण किया था और वह किसके साथ आया था?

ख. राम और सुग्रीव दोनों की स्थिति एकसमान थी। इस कथन को स्पष्ट कीजिए।

खंड 'ग'

6. नीचे लिखे गए प्रश्नों का निर्देशानुसार उत्तर दीजिए

1X10=10

क. बूढ़ा शब्द को भाववाचक संज्ञा में बदलिए।

ख. बगीचे में सुंदर फूल खिले हैं। इसमें विशेषण शब्द को बताइए।

ग. अवधि- अवधी के अर्थ को बताते हुए एक वाक्य बनाइए।

घ. मैं बस से स्कूल आती हूँ। रेखांकित शब्द में कौन सा कारक है?

ङ. पथरीला में प्रयुक्त प्रत्यय को बताइए।

च. कृष्णन फिल्म देखना चाहता है..... मैं मेले में जाना चाहती हूँ। रिक्त स्थान में उपयुक्त योजक शब्द लिखिए।

छ. शेर का स्त्रीलिंग शब्द लिखिए।

ज. स्नेह शब्द का वाक्य में प्रयोग कीजिए।

झ. फल में शब्द जोड़कर एक शब्द बनाइए।

ट. पानी किस प्रकार की संज्ञा है?

7. नीचे दिए गए प्रश्नों के निर्देशानुसार उत्तर दीजिए

1X5=5

क. आकाश का विलोम शब्द लिखिए।

ख. पेड़ के दो पर्यायवाची शब्द लिखिए।

ग. चार भुजाओं वाला वाक्यांश के लिए एक शब्द लिखिए।

घ. मदन कठोर मेहनत कर रहा है..... उसे पास होना है।(क्योंकि, लेकिन,और)  
उपयुक्त शब्दों को रिक्त स्थान में लिखिए।

इ. नीचे दिए गए सही वर्तनी वाले शब्द को लिखिए

नीरज, निरज।

खंड 'घ'

प्रश्न8.पुस्तक खरीदते समय अपने और दुकानदार के बीच हुई बातचीत को संवाद  
के रूप में लिखिए। 5X1=5

केंद्रीय विद्यालय संगठन, बंगलूरु संभाग  
प्रतिदर्श प्रश्न पत्र सत्र 2  
2021-22

कक्षा - छ: VI  
विषय - हिन्दी

समय - 2 घंटे  
पूर्णांक - 40

सामान्य निर्देश:

1. इस प्रश्न पत्र के चार खंड हैं - क, ख, ग, घ
2. सभी खंडों के उत्तर लिखना अनिवार्य है।
3. प्रश्न के उत्तर लिखने से पूर्व प्रश्न संख्या अवश्य लिखें।
4. इस प्रश्न पत्र में कुल 8 प्रश्न हैं।
5. प्रश्नपत्र पढ़ने के लिए 10 मिनट का अतिरिक्त समय दिया जाएगा।

( खंड - क )

प्र. -1 दिए गए अपठित गद्यांश को पढ़कर प्रश्नों के सही उत्तर दें। (1x5=5)

प्रातः काल का समय स्वास्थ्य के लिए बहुत ही लाभदायक होता है। ऐसे समय सैर करने से हमारा तन और मन दोनों लाभान्वित होते हैं। शरीर से आलस्य दूर होकर चुस्ती फुर्ती का संचार होता है। जब शरीर स्वस्थ हो तो मन अपने आप ही प्रफुल्लित रहता है। प्रातः काल शरीर को प्रदूषण रहित शुद्ध वायु प्राप्त होती है। जिससे अनेक रोगों का निवारण होता है। पाचन शक्ति बढ़ती है। प्रकृति की सुंदरता भी आनंदित करती है। जिस प्रकार निरंतर अभ्यास मनुष्य को पारंगत बनाता है, उसी प्रकार प्रातः कालीन सैर भी मनुष्य को तंदुरुस्ती प्रदान करती है। प्रातः कालीन सैर हमारा शारीरिक विकास करने के साथ-साथ हमें प्रसन्नता भी प्रदान करती है।

क.- कौन सा समय सैर करने के लिए उत्तम होता है?

ख.-सैर करने से हमें क्या लाभ होता है?

ग .- प्रातः काल सैर करने से शरीर को क्या प्राप्त होता है?

घ.-शुद्ध वायु से क्या होता है?

ङ.-प्रातः कालीन सैर मनुष्य को क्या प्रदान करती है?

खंड 'ख'

प्र.-2 नीचे लिखे पठित पद्यांश को पढ़कर दिए गए प्रश्नों के सही उत्तर लिखिए। (1x5=5)

सिंहासन हिल उठे राजवंशों ने भृकुटी तानी थी ।  
बूढ़े भारत में भी आई फिर से नई जवानी थी ।  
गुमी हुई आज़ादी की कीमत सबने पहचानी थी।  
दूर फिरंगी को करने की सबने मन में ठानी थी ।  
चमक उठी सन सत्तावन में वह तलवार पुरानी थी।  
बुंदेले हरबोलों के मुंह हमने सुनी कहानी थी।  
खूब लड़ी मर्दानी वह तो झांसी वाली रानी थी।

क.- कविता और कवि का नाम लिखिए?

ख.- राजवंशों ने भृकुटी क्यों तानी थी?

ग.- बूढ़े भारत में नई जवानी आने का क्या अर्थ है?

घ.- कविता में फिरंगी किसे कहा गया है?

ड.- सन् सत्तावन में लोगों ने क्या निश्चय किया था?

**प्रश्न 3. निम्न में से किन्हीं तीन प्रश्नों के उत्तर लिखिए। ( 2 × 3= 6)**

(क) लेखक ने "प्रकृति के अक्षर" किन्हें कहा है?

(ख) हमारे यहां स्त्रियों के खास गीत कौन-कौन से हैं?

(ग) आश्रम में काम करने या करवाने का कौन सा तरीका गांधीजी अपनाते थे?

(घ) बांस का उपयोग वर्तमान समय में किन-किन क्षेत्रों में किया जाता है?

**प्रश्न 4. निम्न में से किसी एक प्रश्न का उत्तर लिखिए। ( 2 × 1 =2 )**

(क) राम ने थकी हुई सीता की क्या सहायता की?

(ख)"सबसे छोटी होऊं"कविता में सबसे छोटे होने की कल्पना क्यों की गई?

**प्रश्न 5. निम्न में से किसी एक प्रश्न का उत्तर लिखिए। (2 × 1 = 2)**

(क) लंका जाते समय हनुमान के रास्ते में कौन-कौन सी बाधाएं आईं?

(ख) राम के राज्याभिषेक से पूर्व अयोध्या नगरी को किस प्रकार से सजाया गया?

( खण्ड - ग)

**प्रश्न 6. निम्नलिखित प्रश्नों को ध्यान से पढ़कर निर्देशानुसार उत्तर दीजिए। (1 × 10 =10 )**

(I) पेड़ ..... पत्ता गिरता है। [ उचित कारक चिन्ह का प्रयोग कीजिए ]

(II) राम रोजाना विद्यालय जाता है।[रेखांकित शब्द में कौन सी संज्ञा है ]

(III) दिन - दीन [शब्दों के भिन्नार्थ लिखिए]

- (IV) तुम्हारा विद्यालय बहुत सुंदर है। [विशेषण शब्द को रेखांकित कीजिए]
- (V) फलवाला [शब्द से प्रत्यय अलग करके लिखिए]
- (VI) मॉर [शब्द का स्त्रीलिंग रूप लिखिए]
- (VII) "और" शब्द का प्रयोग करके एक वाक्य बनाइए।
- (VIII) विद्या+ आलय [शब्द को जोड़कर लिखिए]
- (IX) माता पिता [योजक चिह्न लगाकर लिखिए]
- (X) हिमालय पर्वत से अनेक नदियां निकलती है । [रेखांकित शब्द में कौन सी संज्ञा है]
- प्रश्न 7. निम्नलिखित प्रश्नों को ध्यान से पढ़कर निर्देशानुसार उत्तर दीजिए। (1×5 =5 )
- (XI) असफल [का विलोम शब्द लिखिए।]
- (XII) " पृथ्वी " [के दो पर्यायवाची शब्द लिखिए। ]
- (XIII) जो कभी न मरे [वाक्य के लिए एक शब्द ]
- (IVX) परिक्षा, परीक्षा, पारिक्षा [सही शब्द का चयन कीजिए]
- (XV) पांच..... आम [रिक्त स्थान की पूर्ति कीजिए]

(खण्ड - घ)

प्रश्न 8. निम्न में से किसी एक विषय पर संवाद लिखिए।(1×5=5)

(क). कोरोना महामारी पर राम और श्याम के बीच हुई बातचीत को संवाद के रूप में लिखिए।

अथवा

(ख). चाक और ब्लैक बोर्ड के बीच हुई बातचीत को संवाद के रूप में लिखिए।

\*\*\*\*\*